

XAVIER SCHOOL, GAMHARIA**2nd Unit Test 2018-19****Class : IV****Sub :-Computer Applications****F.M. – 20****I. Fill in the blanks.****(1 x 4 = 4)**

1. By default, text is aligned to the margin.
2. is the vertical distance between successive lines of the text.
3. We can change the font size by clicking on the Font Size drop-down button on the tab.
4. A is a small graphic symbol that sets off an item in a list.

II. Multiple choice questions.**(1 x 4 = 4)**

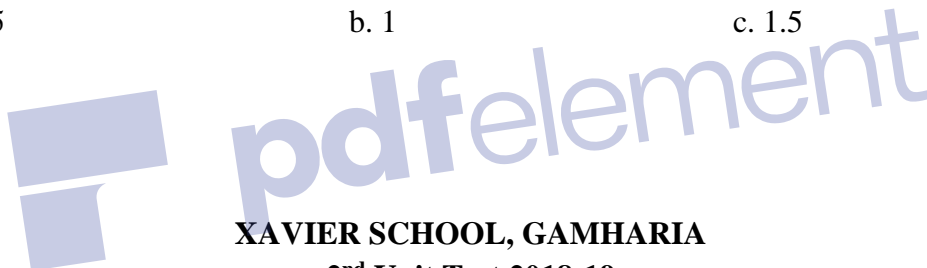
1. alignment is used to set the text evenly between the left and the right margins.

a. Left	b. Center	c. Justify
---------	-----------	------------
2. The default line spacing for most Quick Style sets is

a. Single	b. 1.15	c. 1.5
-----------	---------	--------
3. The Font Size box is available on the tab.

a. Insert	b. Font	c. Home
-----------	---------	---------
4. Default tab stops are set at every inch.

a. 0.5	b. 1	c. 1.5
--------	------	--------

**XAVIER SCHOOL, GAMHARIA****2nd Unit Test 2018-19****Class : IV****Sub :-Computer Applications****F.M. – 20****I. Fill in the blanks.****(1 x 4 = 4)**

1. By default, text is aligned to the margin.
2. is the vertical distance between successive lines of the text.
3. We can change the font size by clicking on the Font Size drop-down button on the tab.
4. A is a small graphic symbol that sets off an item in a list.

II. Multiple choice questions.**(1 x 4 = 4)**

1. alignment is used to set the text evenly between the left and the right margins.

b. Left	b. Center	c. Justify
---------	-----------	------------
2. The default line spacing for most Quick Style sets is

b. Single	b. 1.15	c. 1.5
-----------	---------	--------
3. The Font Size box is available on the tab.

b. Insert	b. Font	c. Home
-----------	---------	---------
4. Default tab stops are set at every inch.

b. 0.5	b. 1	c. 1.5
--------	------	--------

III. Answer the following questions.**(2 x 5 =10)**

1. What does formatting mean?
2. Define the term font.
3. List the different change case options available in Microsoft Word 2010. Explain any two.
4. Define the term text alignment. Name the types of alignments available in Microsoft Word 2010.
5. What do you understand by line spacing?

IV. Application based questions.**(1 x 2 = 2)**

1. Ritika is about to take the printout of the Birthday card which she has designed. But before printing it, she wants to ensure that the card is well drafted as per the desired requirements. What should she do?
2. The Science teacher of Madhav has asked him to create a list of the students of his class and enter their marks into it. What will you suggest him to apply to the list in order to set off each name in the list?

**III. Answer the following questions.****(2 x 5 =10)**

1. What does formatting mean?
2. Define the term font.
3. List the different change case options available in Microsoft Word 2010. Explain any two.
4. Define the term text alignment. Name the types of alignments available in Microsoft Word 2010.
5. What do you understand by line spacing?

IV. Application based questions.**(1 x 2 = 2)**

1. Ritika is about to take the printout of the Birthday card which she has designed. But before printing it, she wants to ensure that the card is well drafted as per the desired requirements. What should she do?
2. The Science teacher of Madhav has asked him to create a list of the students of his class and enter their marks into it. What will you suggest him to apply to the list in order to set off each name in the list?

XAVIER SCHOOL, GAMHARIA**2nd Unit Test 2018-19****Class : IV****Sub :- English Language****F.M. – 30**

I. Change the following sentences from singular to the plural's and rewrite the sentences : (5)

- a) A tomato is a fruit .
- b) The child was caught stealing a mango.
- c) His trousers are torn .
- d) A wolf killed the sheep .
- e) My brother likes the potato very much.

II. Rewrite the following sentences , Using Nouns and Pronouns of the opposite Gender : (5)

- a) His nephews and brothers come to see him.
- b) The lion killed the daughter of a washerman .
- c) Lalit is a good actor .
- d) The mother had a daughter .
- e) The tiger sprang at the hunter and killed him.

**XAVIER SCHOOL, GAMHARIA****2nd Unit Test 2018-19****Class : IV****Sub :- English Language****F.M. – 30**

I. Change the following sentences from singular to the plural's and rewrite the sentences : (5)

- a) A tomato is a fruit .
- b) The child was caught stealing a mango.
- c) His trousers are torn .
- d) A wolf killed the sheep .
- e) My brother likes the potato very much.

II. Rewrite the following sentences , Using Nouns and Pronouns of the opposite Gender : (5)

- a) His nephews and brothers come to see him.
- b) The lion killed the daughter of a washerman .
- c) Lalit is a good actor .
- d) The mother had a daughter .
- e) The tiger sprang at the hunter and killed him.

III. Pick out the Direct and Indirect object and write in the given space below

(2*5 = 10)

	Indirect Object	Direct Object
a) The man offered the child a piece of bread.
b) The king gave the soldiers a rich reward
c) The doctor gave the patient some medicine
d) The old woman told my sister a story
e) The teacher gave Arjun a book

IV. Write down the possessive form of the following :

(4)

- a) The tail of the horses.
.....
- b) The shouts of the thieves.
.....
- c) The cousin of my friend .
.....
- d) The parents of these boys .
.....

V. Write a paragraph in not more than 100 – 120 words on the topic “ My favourite season”

(6)



III. Pick out the Direct and Indirect object and write in the given space below

(2*5 = 10)

	Indirect Object	Direct Object
a) The man offered the child a piece of bread.
b) The king gave the soldiers a rich reward
c) The doctor gave the patient some medicine
d) The old woman told my sister a story
e) The teacher gave Arjun a book

IV. Write down the possessive form of the following :

(4)

- a) The tail of the horses.
.....
- b) The shouts of the thieves.
.....
- c) The cousin of my friend .
.....
- d) The parents of these boys .
.....

V. Write a paragraph in not more than 100 – 120 words on the topic “**My favourite season**”

(6)



XAVIER SCHOOL, GAMHARIA

2nd Unit Test 2018-19

Class : IV

Sub :-English Literature

F.M. – 30

1) Write Meanings of the following words:-

(1*6 = 6)

- a) fragrance – b) embedded – c) oozing –
 d) glimpse e) heaved away – f) pygmy –

2) Write opposites for the following words :-

(¹/₂ * 6 = 3)

- a) Accidentally X b) admiring X c) fragrance X
 d) dim X e) delicate X f) shallow X

3) Complete the following statements :-

(1*3 = 3)

- a) Pine gum hardens into amber _____ .
 b) Grandfather had got the beads from the _____ .
 c) The speaker uses the word “frail” to decribe _____ .

4) Quote from memory :-

Write the name of the poem and poet

(5+2 = 7)

But _____

 _____ day.

XAVIER SCHOOL, GAMHARIA

2nd Unit Test 2018-19

Class : IV

Sub :-English Literature

F.M. – 30

1) Write Meanings of the following words:-

(1*6 = 6)

- a) fragrance – b) embedded – c) oozing –
 d) glimpse e) heaved away – f) pygmy –

2) Write opposites for the following words :-

(¹/₂ * 6 = 3)

- a) Accidentally X b) admiring X c) fragrance X
 d) dim X e) delicate X f) shallow X

3) Complete the following statements :-

(1*3 = 3)

- a) Pine gum hardens into amber _____ .
 b) Grandfather had got the beads from the _____ .
 c) The speaker uses the word “frail” to decribe _____ .

4) Quote from memory :-

Write the name of the poem and poet

(5+2 = 7)

But _____

 _____ day.

- 5) Answer the following questions :-** **(2*3 = 6)**
- a) Write two expressions used to describe the colour of amber.
 - b) How do we know that Jeannie's grandmother loved the gift ?
 - c) What does the plant do when it has pushed up to the surface of the ground ?
- 6) Reference to context :-**
- a) Thousands of little insects fluttered about it in the warm sunshine .
 - i) What is "it" here ? **(1)**
 - ii) Mention the two things that attracted the insects ? **(2)**
- 7) Make sentences with the given word :-** **(1*2 = 2)**
- a) treasured –
 - b) shining –



- 5) Answer the following questions :-** **(2*3 = 6)**
- a) Write two expressions used to describe the colour of amber.
 - b) How do we know that Jeannie's grandmother loved the gift ?
 - c) What does the plant do when it has pushed up to the surface of the ground ?
- 6) Reference to context :-**
- a) Thousands of little insects fluttered about it in the warm sunshine .
 - i) What is "it" here ? **(1)**
 - ii) Mention the two things that attracted the insects ? **(2)**
- 7) Make sentences with the given word :-** **(1*2 = 2)**
- a) treasured –
 - b) shining –

XAVIER SCHOOL, GAMHARIA**2nd Unit Test 2018-19****Class : IV****Sub :-General Knowledge****F.M. – 30**

- 1. Read the Clues and write the words beginning with the letters 'CA'. (5)**
- 1) A large edible flower.
 - 2) The ship of the desert.
 - 3) The leader of a team.
 - 4) A humorous drawing.
 - 5) The art of beautiful hand writing.
- 2. Name the useful Devices. (5)**
- 1) An instrument used for measuring the amount of rainfall in a particular area.
 - 2) An instrument for measuring Temperature.
 - 3) An instrument used to detect and record details of earthquakes.
 - 4) An optical instrument through which distant objects appear nearer.
 - 5) An instrument used for measuring the quality of milk.

**XAVIER SCHOOL, GAMHARIA****2nd Unit Test 2018-19****Class : IV****Sub :-General Knowledge****F.M. – 30**

- 1. Read the Clues and write the words beginning with the letters 'CA'. (5)**
- 1) A large edible flower.
 - 2) The ship of the desert.
 - 3) The leader of a team.
 - 4) A humorous drawing.
 - 5) The art of beautiful hand writing.
- 2. Name the useful Devices. (5)**
- 1) An instrument used for measuring the amount of rainfall in a particular area.
 - 2) An instrument for measuring Temperature.
 - 3) An instrument used to detect and record details of earthquakes.
 - 4) An optical instrument through which distant objects appear nearer.
 - 5) An instrument used for measuring the quality of milk.

- 3. Name the branches of science. (10)**
- | | |
|-----------------------------|------------------------------------|
| 1) plant life | 6) structure of the human body |
| 2) animal life | 7) balance of nature |
| 3) planet and stars | 8) space travel |
| 4) weather conditions | 9) properties of matter and energy |
| 5) inner parts of the earth | 10) the universe |
- 4. Identify the diseases. (5)**
- 1) lack of red blood cells causes.
 - 2) lack of insulin causes.
 - 3) the joints become swollen and painful.
 - 4) difficulty in breathing.
 - 5) female anopheles mosquito can cause.
- 5. Current affairs.**
- 1) Who is the Prime Minister of India? (1)
 - 2) Who is the Chief Minister of Jharkhand? (1)
 - 3) Who is the Chief Minister of West Bengal? (1)
 - 4) Who won the Fifa World Cup 2018? (2)



- 3. Name the branches of science. (10)**
- | | |
|-----------------------------|------------------------------------|
| 1) plant life | 6) structure of the human body |
| 2) animal life | 7) balance of nature |
| 3) planet and stars | 8) space travel |
| 4) weather conditions | 9) properties of matter and energy |
| 5) inner parts of the earth | 10) the universe |
- 4. Identify the diseases. (5)**
- 1) lack of red blood cells causes.
 - 2) lack of insulin causes.
 - 3) the joints become swollen and painful.
 - 4) difficulty in breathing.
 - 5) female anopheles mosquito can cause.
- 5. Current affairs.**
- 1) Who is the Prime Minister of India? (1)
 - 2) Who is the Chief Minister of Jharkhand? (1)
 - 3) Who is the Chief Minister of West Bengal? (1)
 - 4) Who won the Fifa World Cup 2018? (2)

XAVIER SCHOOL, GAMHARIA

2nd Unit Test 2018-19

Class : IV

Sub :-Hindi Language

F.M. – 30

1. निम्न शब्दों के विलोम शब्द लिखें:-

(5)

- (क) आजादी - (ख) आदि - (ग) मान - (घ) नया
-
(ङ) मुश्किल - (च) अपना - (छ) चलना - (ज) क्रय -
(झ) सोना - (ञ) आदान -

2. वचन बदलें:-

(5)

- (क) चिड़िया- (ख) ऋतु - (ग) बेटा - (घ) मक्खियाँ -
(ङ) दिशाएँ - (च) झूला - (छ) सड़क- (ज) तारा
-
(झ) दीवारें - (ञ) बातें -

3. उचित शब्द भरकर वाक्य पूरा करें -

(5)

- (क) सर्वनाम शब्दों का प्रयोग _____ के स्थान पर किया जाता है |
(ख) सर्वनाम शब्दों के भी _____ बदलते हैं |
(ग) सूरज पूर्व से उदय होता और पश्चिम में _____ होता है |
(घ) किसी निश्चित व्यक्ति या वस्तु के बारे में बताने वाले सर्वनाम शब्दों को _____ सर्वनाम कहते हैं।



XAVIER SCHOOL, GAMHARIA

2nd Unit Test 2018-19

Class : IV

Sub :-Hindi Language

F.M. – 30

1. निम्न शब्दों के विलोम शब्द लिखें:-

(5)

- (क) आजादी - (ख) आदि - (ग) मान - (घ) नया
-
(ङ) मुश्किल - (च) अपना - (छ) चलना - (ज) क्रय -
(झ) सोना - (ञ) आदान -

2. वचन बदलें:-

(5)

- (क) चिड़िया- (ख) ऋतु - (ग) बेटा - (घ) मक्खियाँ -
(ङ) दिशाएँ - (च) झूला - (छ) सड़क- (ज) तारा
-
(झ) दीवारें - (ञ) बातें -

3. उचित शब्द भरकर वाक्य पूरा करें -

(5)

- (क) सर्वनाम शब्दों का प्रयोग _____ के स्थान पर किया जाता है |
(ख) सर्वनाम शब्दों के भी _____ बदलते हैं |
(ग) सूरज पूर्व से उदय होता और पश्चिम में _____ होता है |

(घ) किसी निश्चित व्यक्ति या वस्तु के बारे में बताने वाले सर्वनाम शब्दों को _____ सर्वनाम कहते हैं।

(ङ) वे सर्वनाम शब्द जो काम करनेवाला अपने लिए प्रयोग करता है, _____ सर्वनाम कहलाता है।

4. निम्न सर्वनाम शब्दों के बहुवचन लिखें:- (5)

(क) यह- (ख) उसका- (ग) इसका- (घ) इसने-
(ङ) इसे-

5. निम्न प्रश्नों के उत्तर एक या दो वाक्य में दें:- (8)

(क) वचन किसे कहते हैं?
(ख) सर्वनाम के कितने भेद हैं? उनके भेदों के नाम लिखें।
(ग) विलोम शब्द किसे कहते हैं?
(घ) हमेशा एकवचन तथा बहुवचन में प्रयोग होनेवाले शब्दों के दो-दो उद्धारण लिखें।

6. निम्न वाक्यों में सही सर्वनाम शब्द लिखकर वाक्य पूरा करें:-

(2)

(क) मैं बस्ता _____ लगाता हूँ। (निजवाचक सर्वनाम)
(ख) _____ दरवाजे पर खड़ा है। (अनिश्चय वाचक सर्वनाम)
(ग) _____ यह पेंटिंग बनाई है? (प्रश्नवाचक सर्वनाम)
(घ) राजा दशरथ ने _____ कहा, राम ने वैसा ही किया। (संबंधवाचक सर्वनाम)



(ङ) वे सर्वनाम शब्द जो काम करनेवाला अपने लिए प्रयोग करता है, _____ सर्वनाम कहलाता है।

4. निम्न सर्वनाम शब्दों के बहुवचन लिखें:- (5)

(क) यह- (ख) उसका- (ग) इसका- (घ) इसने-
(ङ) इसे-

5. निम्न प्रश्नों के उत्तर एक या दो वाक्य में दें:- (8)

(क) वचन किसे कहते हैं?
(ख) सर्वनाम के कितने भेद हैं? उनके भेदों के नाम लिखें।
(ग) विलोम शब्द किसे कहते हैं?
(घ) हमेशा एकवचन तथा बहुवचन में प्रयोग होनेवाले शब्दों के दो-दो उद्धारण लिखें।

6. निम्न वाक्यों में सही सर्वनाम शब्द लिखकर वाक्य पूरा करें:-

(2)

(क) मैं बस्ता _____ लगाता हूँ। (निजवाचक सर्वनाम)
(ख) _____ दरवाजे पर खड़ा है। (अनिश्चय वाचक सर्वनाम)
(ग) _____ यह पेंटिंग बनाई है? (प्रश्नवाचक सर्वनाम)
(घ) राजा दशरथ ने _____ कहा, राम ने वैसा ही किया। (संबंधवाचक सर्वनाम)

III. □□□ -----
IV. □□□ -----

4. □□□□□□□□ □□ □□□ □□ -□□ □□□□□□□□□□ □□□□ □□□□ -
{4}

I. □□□□ II. □□□□ III. □□□□□□ IV. □□□□

5. □□□ □□ □□□□□□□□ □□ □□□□□ □□ □□ □□□ □□□□□□ □□□ □□□□
- {2x5=10}

I. □□□□□□□□ □□ □□□ □□□□ □□□□ □□ □□□□ □□□□ ?

II. □□□□□□□□ □□□□□□□□ □□ □□□□ □□ □□ □□ □□□ □□□ □□□□□□ ?

III. □□□□□□1□□□□ □□□ □□□□□□□□□□ □□ □□□ □□□□□□□□ □□ □□□□ - □□□□
□□ □□□□□□□□ □□□□□ ?

IV. □□□□ □□ □□□□□ □□ □□□□ □□□ □□□ ?

V. □□□□□ □□ □□□□ □□ □□□□ □□□□□□?

6. □□□□□ □□ □□□□□ □□□□ □□□□□ □□□□ □□□□ □□□ □□ □□□□ □□ □□ ?
□□ □□ □□□□
□□□□□□□□ □□□ □□□□□ 1

{6}



4. □□□□□□□□ □□ □□□ □□ -□□ □□□□□□□□□□ □□□□ □□□□ -
{4}

I. □□□□ II. □□□□ III. □□□□□□ IV. □□□□

5. □□□ □□ □□□□□□□□ □□ □□□□□ □□ □□ □□□ □□□□□□ □□□ □□□□
- {2x5=10}

I. □□□□□□□□ □□ □□□ □□□□ □□□□ □□ □□□□ □□□□ ?

II. □□□□□□□□ □□□□□□□□ □□ □□□□ □□ □□ □□ □□□ □□□ □□□□□□ ?

III. □□□□□□1□□□□ □□□ □□□□□□□□□□ □□ □□□ □□□□□□□□ □□ □□□□ - □□□□
□□ □□□□□□□□ □□□□□ ?

IV. □□□□ □□ □□□□□ □□ □□□□ □□□ □□□ ?

V. □□□□□ □□ □□□□ □□ □□□□ □□□□□□?

6. □□□□□ □□ □□□□□ □□□□ □□□□□ □□□□ □□□□ □□□ □□ □□□□ □□ □□ ?
□□ □□ □□□□
□□□□□□□□ □□□ □□□□□ 1

{6}

XAVIER SCHOOL, GAMHARIA**2nd Unit Test 2018-19****Class : IV****Sub :-Moral Science****F.M. – 30****A. Fill in the blanks-****(1x5=5)**

_____ does not serve us well,

It blinds us to the_____.

If only we could_____ it,

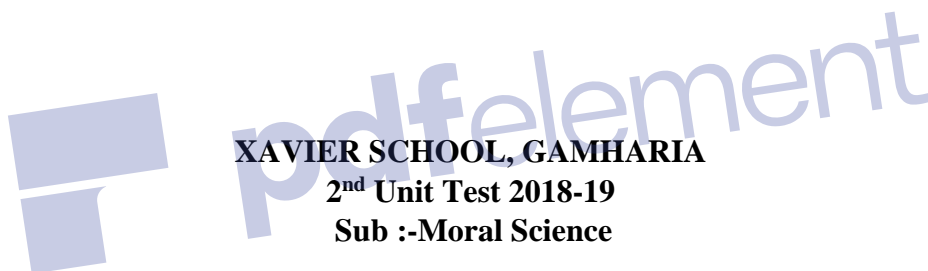
We'd all do as we should.

_____ me deal with it,my Lord,

And _____ with all my might.

B. Write true or false-**(1x5=5)**

- 1) We should share our things with others-
- 2) We should feeljealous with our friends-
- 3) Your feelings influence your actions-
- 4) You can always get, what you want-
- 5) We should not control our anger-

**Class : IV****XAVIER SCHOOL, GAMHARIA****2nd Unit Test 2018-19****Sub :-Moral Science****F.M. – 30****A. Fill in the blanks-****(1x5=5)**

_____ does not serve us well,

It blinds us to the_____.

If only we could_____ it,

We'd all do as we should.

_____ me deal with it,my Lord,

And _____ with all my might.

B. Write true or false-**(1x5=5)**

- 1) We should share our things with others-
- 2) We should feeljealous with our friends-
- 3) Your feelings influence your actions-
- 4) You can always get, what you want-
- 5) We should not control our anger-

C. Answer the following questions in your own words-

- 1) How do you feel when someone is praised? (2)
- 2) Do you think that God makes each of us special and unique? Explain it. (2)
- 3) Make a list of your special talent and ability? (2)
- 4) When we should say- a) I am sorry (b) Thank you. (1x2=2)
- 5) Write three ways that will help you to control your anger? (1x3=3)
- 6) Complete these sentences about yourself- (1x3=3)
 - When I feel angry-
 - a) I sometimes-_____
 - b) I always-_____
 - c) I never-_____

D. Write a prayer asking God to teach you to be thankful for what you have. (3)

E. Draw and colour an angry or a jealous face. (3)

 pdfelement

C. Answer the following questions in your own words-

- 1) How do you feel when someone is praised? (2)
- 2) Do you think that God makes each of us special and unique? Explain it. (2)
- 3) Make a list of your special talent and ability? (2)
- 4) When we should say- a) I am sorry (b) Thank you. (1x2=2)
- 5) Write three ways that will help you to control your anger? (1x3=3)
- 6) Complete these sentences about yourself- (1x3=3)
 - When I feel angry-
 - a) I sometimes-_____
 - b) I always-_____
 - c) I never-_____

D. Write a prayer asking God to teach you to be thankful for what you have. (3)

E. Draw and colour an angry or a jealous face. (3)

XAVIER SCHOOL, GAMHARIA

2nd Unit Test 2018-19

Class : IV

Sub :-Mathematics

F.M. – 30

Answer all the questions.

A. Fill in the blanks

(10x1=10)

- 1) How many minutes are there in 1 hour?
- 2) There aredays in a leap year.
- 3)comes in between July and September.
- 4) 1 day =..... hours
- 5) Deepika plays at 4:00.....
- 6) Part of a whole is called.....
- 7) Fractions with the..... are called like fractions.
- 8) How many one-thirds make a whole?.....
- 9) Fractions having 1 as numerator are called fractions.
- 10) $\frac{5}{4}$ is fraction.

XAVIER SCHOOL, GAMHARIA

2nd Unit Test 2018-19

Class : IV

Sub :-Mathematics

F.M. – 30

Answer all the questions.

A. Fill in the blanks

(10x1=10)

- 1) How many minutes are there in 1 hour?
- 2) There aredays in a leap year.
- 3)comes in between July and September.
- 4) 1 day =..... hours
- 5) Deepika plays at 4:00.....
- 6) Part of a whole is called.....
- 7) Fractions with the..... are called like fractions.
- 8) How many one-thirds make a whole?.....
- 9) Fractions having 1 as numerator are called fractions.
- 10) $\frac{5}{4}$ is fraction.

B. Answer the following questions**(10x2=20)**

1. Write next four equivalent fraction of $\frac{4}{5}$
2. Reduce $\frac{21}{28}$ to its lowest terms.
3. Convert $3\frac{1}{3}$ into improper fraction.
4. Convert $\frac{58}{9}$ into mixed fraction.
5. Add $\frac{8}{15} + \frac{1}{15} + \frac{2}{15}$
6. Which fraction is smaller $\frac{5}{12}$ or $\frac{3}{10}$?
7. What time will it be 2 hours after 7:35 a.m?
8. What time will it be 2 hours before 1:30 p.m ?
9. Convert into months
 - (i) 5 years
 - (ii) 10 years 8 months
10. Convert into days
 - (i) 6 months
 - (ii) 10 months 12 days

B. Answer the following questions**(10x2=20)**

1. Write next four equivalent fraction of $\frac{4}{5}$
2. Reduce $\frac{21}{28}$ to its lowest terms.
3. Convert $3\frac{1}{3}$ into improper fraction.
4. Convert $\frac{58}{9}$ into mixed fraction.
5. Add $\frac{8}{15} + \frac{1}{15} + \frac{2}{15}$
6. Which fraction is smaller $\frac{5}{12}$ or $\frac{3}{10}$?
7. What time will it be 2 hours after 7:35 a.m?
8. What time will it be 2 hours before 1:30 p.m ?
9. Convert into months
 - (i) 5 years
 - (ii) 10 years 8 months
10. Convert into days
 - (i) 6 months
 - (ii) 10 months 12 days

XAVIER SCHOOL, GAMHARIA**2nd Unit Test 2018-19****Class : IV****Sub :-Social Studies****F.M. – 30****A) Fill in the blanks.****(5×1=5)**

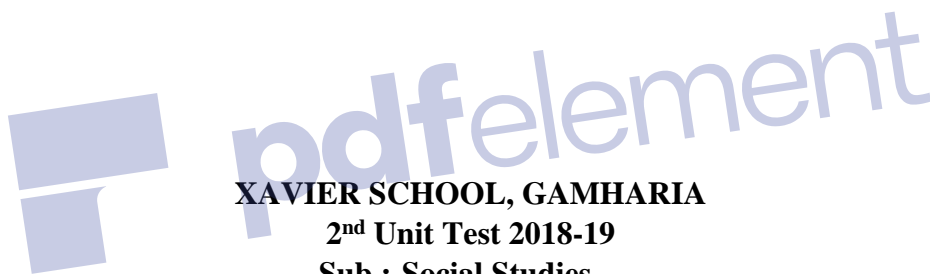
1. Our historical monuments are _____ property.
2. The smallest state in India is _____.
3. _____ is the smallest union territory.
4. India became independent on_____.
5. Museums have a collection of_____.

B) Give the meanings of the following words.**(5×1=5)**

- 1) Forefather
- 2) Spoil
- 3) Island
- 4) Central Government
- 5) Obstruct

C) Write true or false.**(5×1=5)**

- 1) Sikkim is the smallest state.
- 2) India has 29 states.
- 3) Ranchi is the capital of Jharkhand.
- 4) Spoiling the school walls is not a good habit.
- 5) Libraries do not keep rare works of ancient times.

**Class : IV****Sub :-Social Studies****F.M. – 30****A) Fill in the blanks.****(5×1=5)**

1. Our historical monuments are _____ property.
2. The smallest state in India is _____.
3. _____ is the smallest union territory.
4. India became independent on_____.
5. Museums have a collection of_____.

B) Give the meanings of the following words.**(5×1=5)**

- 1) Forefather
- 2) Spoil
- 3) Island
- 4) Central Government
- 5) Obstruct

C) Write true or false.**(5×1=5)**

- 1) Sikkim is the smallest state.
- 2) India has 29 states.
- 3) Ranchi is the capital of Jharkhand.
- 4) Spoiling the school walls is not a good habit.
- 5) Libraries do not keep rare works of ancient times.

D) Match the following.**(5×1=5)**

- | | |
|----------------|---------------|
| 1) Tamil Nadu | a) Chandigarh |
| 2) West Bengal | b) Jaipur |
| 3) Maharashtra | c) Chennai |
| 4) Rajasthan | d) Mumbai |
| 5) Haryana | e) Kolkata |

E) Answer the following questions.**(5×2=10)**

1. When was India declared a Republic?
2. What are union territories?
3. What is public property?
4. Explain the difference between private property and public property ?
5. Why is it necessary to protect public property?

D) Match the following.**(5×1=5)**

- | | |
|----------------|---------------|
| 1) Tamil Nadu | a) Chandigarh |
| 2) West Bengal | b) Jaipur |
| 3) Maharashtra | c) Chennai |
| 4) Rajasthan | d) Mumbai |
| 5) Haryana | e) Kolkata |

E) Answer the following questions.**(5×2=10)**

1. When was India declared a Republic?
2. What are union territories?
3. What is public property?
4. Explain the difference between private property and public property ?
5. Why is it necessary to protect public property?

XAVIER SCHOOL, GAMHARIA

2nd Unit Test 2018-19


Class : IV

Sub :- Sanskrit

F.M. – 30

1. परस्परमेलन कुरुत ।


(5)



भल्लूकः



सिंहः



वानरः



हरिणः



धेनुः

2. हिन्दी में अनुवाद कीजिए ।

(6)

(क) एषः कः

(ख) एषः गजः

(ग) एते के

(घ) एते वानराः

(ङ) एषा का अस्ति

(च) एताः काः सन्ति

3. वाक्यानि बहुवचने परिवर्तयत

(5)

(क) बालः पठति

(ख) गजः चलति

(ग) एषा बालिका लिखति

(घ) एषा नौका तरति

(ङ) एषा कलिका विकसति

4. वाक्यानि बहुवचने परिवर्तयत (3)

(क) बालिका अस्ति _____

(ख) नौका अस्ति _____

(ग) अजा अस्ति _____

5. □□□□□□□□□□□□I□ लिखत

(6)

(क) त्रयः पालिताः पशवः _____

(ख) त्रयः पालिताः पश्रिणः _____

6. आम् / नहि पदेन उत्तरत – (5)

(क) सरिता वहति । _____ (ख) नौकाः पतन्ति । _____

(ग) कलिकाः विकसन्ति । _____ (ग) कोकिला खादति । _____

(ङ) सारिका कुजन्ति । _____

XAVIER SCHOOL, GAMHARIA**2nd Unit Test 2018-19****Class : IV****Sub :- Science****F.M. – 30****I. Tick (✓) the correct answer (1 x 5 = 5 marks)**

- tree is mostly found on mountains.
 - Coconut
 - Mango
 - Fir
 - Neem
- Thick layer of fat under the skin of some polar animals is called as
 - blubber
 - wings
 - camouflage
 - none of these
- The land animals that live mostly on trees are known as:
 - aerial animals
 - amphibians
 - arboreal animals
 - none of these
- Plants like, that trap insects are known as insectivorous plants
 - pitcher plant
 - lotus
 - cactus
 - none of these
- Plants growing in deserts have their modified into spines.
 - stem
 - leaves
 - roots
 - flower

II. Give one word for the following (1 x 5 = 5 marks)

- Movement of animals from one region to another, according to the season of the year:

- Ability to blend with the surroundings: _____
- Animals like bear sleep for several months to avoid winter season. This is called

- Plant matter found at the bottom of the swampy areas gradually turn into:

- Animals that are close to disappearing from the Earth: _____

III. Define the following. (1 x 5 = 5 marks)

- Habitat
- Adaptation
- Epiphytes
- Aestivation
- Hibernation

IV. Match the following. (1 x 5 = 5 marks)

- | | |
|------------------|--------------------------------------|
| 1. Water lily | a. Sharp claws with strong grip |
| 2. Seagrass | b. Breathes with moist skin in water |
| 3. Monkey | c. Insectivorous plant |
| 4. Frog | d. Underwater plant |
| 5. Pitcher plant | e. Fixed aquatic plant |

V. State True or False. (1 x 5 = 5 marks)

- Sabre-toothed cat is an extinct animal. _____
- Animals adapt to stay safe in their environment. _____
- Cactus can survive in cold conditions. _____
- Insectivorous plants are only producers. _____
- Venus flytrap is an example of an insectivorous plant. _____

VI. Answer the following questions.**(1 x 5 =5 marks)**

1. What is the special feature of evergreen trees?
2. What is a parasite?
3. Why do leaves of plants growing in mountain regions have a waxy coating?
4. Give example(s) of some animals that camouflage and mimic.
5. Name two coniferous trees.

