

XAVIER SCHOOL, GAMHARIA**2nd Term Exam 2018-19****Class : III****Sub :-Computer Applications****F.M. – 60****Date :- 09-10-2018****Time :- 2 hrs****I. Answer in one word or sentence :- (1*5=5)**

1. Which tool is used to select an irregular part of an image?
2. Where is the Zoom slider bar present in the MS paint window?
3. Which tool do we use on the home tab to increase the size of the picture?
4. Which shapes from the shapes group is used for the dialogues, displayed in a comic book?
5. Name the various File format supported by Paint?

II. Fill in the blanks :- (1*10=10)

1. To save a File in Paint, use _____ key combination.
2. Paint provides _____ different types of Callout shapes.
3. A photograph clicked using digital camera is saved in _____ File format.
4. The _____ tool is used to copy color from one object to another.
5. The _____ tool is used to select any part of a picture that you want to change.
6. The Paste command will always insert the drawing at the _____ corner of the drawing area.
7. The first page of any website is known as _____
8. A _____ is a collection of related WebPages linked to one another.
9. A _____ is a Global network that connects millions of computer worldwide.
10. A _____ refers to a person who uses Internet safely and in the right way.

III. Answer the following? (2*10=20)

1. Write any two advantages of Internet?
2. Define Search engine?
3. Write short notes on the responsibilities of a good digital citizen?
4. What do you understand by Webpage?
5. What is Internet? Explain any two uses of Internet?
6. Write any three measures that you should take to protect yourself online?
7. What are the two ways to flip a picture? Explain any one?
8. What are the various selection tools in MS paint? Explain any one.
9. What do mean by Zooming a Picture?
10. How will you create a callout shapes in Paint?

IV. Write the full form of different File Format? (1*5=5)

1. BMP
2. JPEG
3. GIF
4. TIFF
5. PNG

V. Richa is using Internet for the first time. Help her in making the appropriate actions from the list given below: (1*5=5)

1. Sharing pictures over Internet. _____
2. Making harsh comments to somebody. _____
3. Using Anti –virus on the system. _____
4. Keeping a back up of the data. _____
5. Clicking on every window that appears without giving it a thought. _____

VI. Application based questions :- (1*4=4)

1. Suhani is having an account on a social networking website. She is continuously getting abusive comments from an unknown person. What should be her immediate action?
2. While using Internet, Sam downloaded an attachment from his inbox to the computer .After sometime his computer stopped working .What could be the possible reason? Suggest the action that could have saved his computer?
3. Kritika has drawn a Pink car in Paint. She wants to draw two more cars of the same layout. Suggest her appropriate option to do the same.
4. Parul has drawn beautiful scenery depicting a sunny day but by mistake she drew stars in it. Which tool can she use to remove these stars?

VII. Write the difference between :- (2*2=4)

1. Rectangular selection tool vs Free form selection tool
2. Webpage vs Home page

VIII. Multiple choice questions :- (1*7=7)

1. _____ is one of the popular payment gateways.
 - a. PayPal
 - b. Bing
 - c. Ekiga
2. _____ is one of the most popular search engines, founded by Larry page and Sergey Brin .
 - a. Yahoo
 - b. Bing
 - c. Google
3. _____ is an example of anti –virus software.
 - a. Skype
 - b. PayPal
 - c. Mcfee
4. The software program which helps in accessing the entire information available on the web is called _____.
 - a. Hyperlink
 - b. Web browser
 - c. Hypertext
5. JPEG stands for _____.
 - a. Joint pictures expert group
 - b. Joint Photographic experts group
 - b. Joined Photographic experts group
6. Which tool is used to erase a part of the drawing?
 - a. Crop
 - b. Delete
 - c. Erase
7. You can cut and resize the image using the _____ tool.
 - a. Crop
 - b. Edges
 - c. Cut

XAVIER SCHOOL, GAMHARIA

2nd Term Exam 2018-19

Class : III

Sub :-Drawing

F.M. – 25

Date :- 03-10-2018

Time :- 1½ hrs

Name :- _____ Roll. No :- _____

Ques 1 Colour the given picture



Ques. 2 Draw and colour Joker .



XAVIER SCHOOL, GAMHARIA

2nd Term Exam 2018-19

Class : III

Sub :-English Literature

F.M. – 60

Date :- 08-10-2018

Time :- 2 hrs

- 1) Write the meanings of the words given below: (6*1=6)**
 i) clung ii) groomed iii) crude iv) feed
 v) darted away vi) overjoyed
- 2) Write the opposites of the words given below: (8*1=8)**
 i) deep v) remember
 ii) speak vi) tired
 iii) same vii) hungry
 iv) screamed viii) loved
- 3) Write the rhyming words of the words given below: (6*1=6)**
 i) Money ii) funny iii) crude iv) kicked v) yellow vi) bird
- 4) Complete the following sentences: (6x1=6)**
 a) The king felt sorry for the bird because
 b) The most important day in Helen's life was when
 c) Benjamin made a picture of his
 d) When she read Braille Helen always looked for
 e) The three animals helped the bird by
 f) The bird said that the snake could not
- 5) Write true or false : (6x1=6)**
 a) Helen Keller was born in 1880 in Paris.
 b) Benjamin used a paper and pencil to draw the picture.
 c) The golden bird flew out of the cage
 d) Helen never used signs to express her words.
 e) Benjamin made the picture when both his father and mother were at home.
 f) The monkey wanted to help the bird.
- 6) Answer the following questions. (18)**
 a) What did the monkey the snake and the chameleon do? (3)
 b) How did Benjamin's mother first feel when she saw the picture he drew? What did she do? (3)
 c) What did Helen notice about other? (2)
 d) What does the wind do to the leaves? (2)
 e) How did the bird thank the monkey, the snake and the chameleon? (2)
 f) When Helen spoke her first whole sentence, how did she feel? (2)
 g) How does the wind move the sea? (2)
 h) What made the monkey say this "Do as you like"? (2)
- 7) Make sentences : (4x1=4)**
 i) king ii) tired iii) golden iv) cardboard.
- 8) Write the first two stanzas of the poem "The Wind" and also write the name of the poet : (6)**

XAVIER SCHOOL, GAMHARIA

2nd Term Exam 2018-19

Class : III

Sub :-General Knowledge

F.M. – 60

Date :- 12-10-2018

Time :- 2 hrs

I. Fill in the blanks using the following clues: (10)

Kitchen, Solar, System, Satellite, Heart, Mercury, Puddle, Earth,
Wasp, Lamb, Planets

1. _____ is an organ that pumps blood.
2. _____ are the heavenly bodies that move around the sun.
3. The sun and its family of planets are called the _____.
4. A room where food is cooked is called a _____.
5. A small amount of water collected on the ground is called _____.
6. _____ is the planet on which we live.
7. _____ is a yellow and black striped stinging insect.
8. _____ is an object in the space which moves around a planet in an orbit.
9. A young sheep is called _____.
10. Planet _____ is the closest to the sun.

II. Write the names of any eight parts of the human body. (8)

III. Match the following: (6)

- | | |
|--|---------------------|
| 1) Study germs closely | a) Binoculars |
| 2) See our own image | b) Magnifying glass |
| 3) See clearly if you have weak eyesight | c) Microscope |
| 4) Read tiny details on a medicine bottle | d) Mirror |
| 5) Look for a ship sailing at sea | e) Spectacles |
| 6) Look closely at the stars and moon at night | f) Telescope |

IV. Do as directed:

A. Complete the series: (4)

- 1) 11, 21, 31, 41 ____ ____
- 2) AC DF GI JL ____ ____
- 3) 3, 6, 9, 12 ____ ____
- 4) 5, 10, 15, 20 ____ ____

B. Circle the odd one out: (4)

- | | | | |
|-----------|-------|-----------|---------|
| 1) Green | cone | cube | circle. |
| 2) Guitar | piano | harmonium | screw. |
| 3) Temple | boat | mosque | church. |
| 4) Pencil | bird | box | pen. |

C. Complete the comparisons: (4)

- 1) _____ is to shoes as carpenter is to furniture.
- 2) _____ is to fin as bird is to wings.
- 3) Horse is to neigh as goat is to _____.
- 4) Fan is to summer as sweater is to _____.

D. Arrange the following words in alphabetical order: (3)

- 1) Cat table great book
- 2) Sparrow hen monkey crow
- 3) Place city maize drum

E. Name the group: (4)





- 1) Potato carrot brinjal
- 2) Sunday Monday Tuesday
- 3) Mango watermelon strawberry
- 4) Red blue green orange

F. Tick the correct option: (5)

- 1) If a square is cut diagonally into two, what would you get?
a) 2 triangles b) 2 squares
- 2) If two semicircles are joined, what would you get?
a) an oval b) a circle
- 3) Washing machine, microwave oven, telephone-
a) Tongue b) paper c) computer
- 4) Which one these can have two open sides?
a) Cone b) cylinder
- 5) Rose, lotus, lily-
a) Fruits b) flowers c) vegetables

V. Write the names of machines invented by the following inventors: (6)

- | | | |
|---------------------|--------------------|--------------------------|
| 1) John Logie Baird | 2) Alfred Nobel | 3) Karl Benz |
| 4) Walter Hunt | 5) Wright Brothers | 6) Alexander Graham Bell |

VI. Write the names of following computer related devices: (6)

XAVIER SCHOOL, GAMHARIA

2nd Term Exam 2018-19

Class : III

Sub :-Hindi Language

F.M. – 60

Date :- 10-10-2018

Time :- 2 hrs

1. सही विकल्प चुनें:-

10

- 1) स्त्री या पुरुष जाति का बोध करानेवाले शब्दों को कहते हैं।
क) स्त्रीलिंग ख) लिंग ग) पुल्लिंग
- 2) इनमें से अलग लिंग कौन-सा है?
क) धोबिन ख) माली ग) मालिक
- 3) वचन हमें बताते हैं।
क) जाति ख) संख्या ग) स्थान
- 4) आदर देने के लिए हमेशा का प्रयोग करते हैं।
क) बहुवचन ख) वचन ग) एकवचन
- 5) सर्वनाम शब्दों की जगह प्रयोग किये जाते हैं।
क) संज्ञा ख) लिंग ग) वचन
- 6) संज्ञा के स्थान पर प्रयोग किये जाने वाले शब्दों को कहते हैं।
क) लिंग ख) सर्वनाम ग) वचन
- 7) सीमा कक्षा में प्रथम आती है।
क) उसकी ख) अपनी ग) वचन
- 8) आँखें दिखाना- मुहावरे का अर्थ क्या है?
क) धोखा देना ख) नींद आना ग) क्रोध से देखना
- 9) कानों-कान खबर न होना- मुहावरे का अर्थ है-
क) किसी को पता न लगना ख) कुछ असर न होना
ग) बहुत प्यारा होना
- 10) दाँत खट्टे करना- मुहावरे का अर्थ क्या होता है?
क) दाँत साफ करना ख) बुरी तरह देना ग) गुस्सा करना

2. इनके विलोम शब्द लिखें:-

8

- | | | | |
|------------|-----------|----------|--------------|
| 1) एक | 2) स्वच्छ | 3) ज्ञान | 4) दुर्गंध |
| 5) मुश्किल | 6) अपना | 7) मौखिक | 8) अनुपस्थित |

3. रेखांकित अनेक शब्दों के लिए एक शब्द लिखकर वाक्य दोबारा लिखो:- 5

- क) मेरे पिताजी बीमारों का इलाज करनेवाले हैं।
- ख) शेर जंगल में रहने वाला जानवर है।
- ग) आज हमलोग जहाँ पशु-पक्षी रखे जाते हैं जाना है।
- घ) यह समारोह महीने में एक बार होने वाला है।
- ङ) सृजन सिंह किसी से नहीं डरता है।

4. दिए शब्दों के वचन लिखें :- 5

- | | | | |
|-------------|------------|-------------|----------|
| 1) लड़कियाँ | 2) तारा | 3) पुस्तकें | 4) बहनें |
| 5) खिड़की | 6) चिड़िया | 7) वृक्षों | 8) सड़क |
| 9) नहरों | 10) बच्चा | | |

5. दिए गए मुहावरों को उनके अर्थ के साथ मिलाएँ:- 8

- | | |
|--------------------------|--------------------------------|
| क) आँखों का तारा होना | — हरेक बात पर विश्वास करनेवाला |
| ख) आँखें खुलना | — बहुत चतुर होना |
| ग) दाँत पीसना | — बहुत प्यारा होना |
| घ) दाँत काटी रोटी होना | — शिकायत करना |
| ङ) कान का कच्चा होना | — सच्चाई पता लगना |
| च) कान भरना | — गहरी मित्रता होना |
| छ) कान कतरना | — गुस्सा करना |
| ज) दाँतो तले उँगली दबाना | — हैरान होना |

6. दिए गए सर्वनाम शब्दों के बहुवचन लिखें:- 5

- | | | | | |
|---------|---------|---------|-------|---------|
| 1) इसका | 2) उसने | 3) मेरा | 4) वह | 5) मुझे |
|---------|---------|---------|-------|---------|

7. रेखांकित संज्ञा शब्दों के स्थान पर उचित सर्वनाम शब्द का प्रयोग कर वाक्य दोबारा लिखें:- 5

- क) नेहा ने नुपुर से नेहा की पुस्तक माँगी।
- ख) रमन के माता-पिता रमन से बहुत प्यार करते हैं।
- ग) माताजी, माताजी कहाँ जा रही हैं।
- घ) चमन के पिताजी चमन के लिए खिलौने लाए।
- ङ) अंशु और अंकन अच्छे दोस्त हैं। अंशु और अंकन एक साथ पढ़ते हैं।

8. क) वचन किसे कहते हैं? उदाहरण सहित लिखें। 2

ख) लिंग किसे कहते हैं? इसके कितने भेद हैं? लिखें और दो-दो उदाहरण दें :- 4

9. किसी एक विषय पर पत्र लिखें:-

8

क) कक्षा की गतिविधि के बारे बताते हुए पिताजी को पत्र लिखें।

अथवा

ख) अपने मित्र को निमंत्रण पत्र लिखें।

अथवा

ग) अवकाश के लिए प्रधानाचार्य को आवेदन पत्र लिखें।

5) $\int \frac{1}{x^2} dx$ -
 {5}

- i. $\int \frac{1}{x^2} dx = -\frac{1}{x} + C$ ii. $\int \frac{1}{x^2} dx = \frac{1}{x} + C$ iii. $\int \frac{1}{x^2} dx = -\frac{1}{x^2} + C$
 iv. $\int \frac{1}{x^2} dx = \frac{1}{x^2} + C$ v. $\int \frac{1}{x^2} dx = -\frac{1}{x^2} + C$

6) $\int \frac{1}{x^2} dx$ -
 {5}

- i. $\int \frac{1}{x^2} dx = -\frac{1}{x} + C$ ii. $\int \frac{1}{x^2} dx = \frac{1}{x} + C$
 iii. $\int \frac{1}{x^2} dx = -\frac{1}{x^2} + C$ iv. $\int \frac{1}{x^2} dx = \frac{1}{x^2} + C$
 v. $\int \frac{1}{x^2} dx = -\frac{1}{x^2} + C$

7) $\int \frac{1}{x^2} dx$ -
 {6}

- i. $\int \frac{1}{x^2} dx = -\frac{1}{x} + C$ ii. $\int \frac{1}{x^2} dx = \frac{1}{x} + C$
 iii. $\int \frac{1}{x^2} dx = -\frac{1}{x^2} + C$ iv. $\int \frac{1}{x^2} dx = \frac{1}{x^2} + C$
 v. $\int \frac{1}{x^2} dx = -\frac{1}{x^2} + C$

8) $\int \frac{1}{x^2} dx$ -
 {5}

- i. $\int \frac{1}{x^2} dx = -\frac{1}{x} + C$ ii. $\int \frac{1}{x^2} dx = \frac{1}{x} + C$ iii. $\int \frac{1}{x^2} dx = -\frac{1}{x^2} + C$
 iv. $\int \frac{1}{x^2} dx = \frac{1}{x^2} + C$ v. $\int \frac{1}{x^2} dx = -\frac{1}{x^2} + C$

9) $\int \frac{1}{x^2} dx$ -
 {6}

- i. $\int \frac{1}{x^2} dx = -\frac{1}{x} + C$?
 ii. $\int \frac{1}{x^2} dx = \frac{1}{x} + C$?
 iii. $\int \frac{1}{x^2} dx = -\frac{1}{x^2} + C$?
 iv. $\int \frac{1}{x^2} dx = \frac{1}{x^2} + C$?
 v. $\int \frac{1}{x^2} dx = -\frac{1}{x^2} + C$?
 vi. $\int \frac{1}{x^2} dx = \frac{1}{x^2} + C$?

10) $\int \frac{1}{x^2} dx$ - $\int \frac{1}{x^2} dx$ - $\int \frac{1}{x^2} dx$ -
 {12}

- i. $\int \frac{1}{x^2} dx = -\frac{1}{x} + C$?
 ii. $\int \frac{1}{x^2} dx = \frac{1}{x} + C$?
 iii. $\int \frac{1}{x^2} dx = -\frac{1}{x^2} + C$?

iv. $\frac{1}{2} + \frac{1}{3} = \frac{5}{6}$?

11) $\frac{1}{2} + \frac{1}{3} = \frac{5}{6}$? $\frac{1}{2} + \frac{1}{3} = \frac{5}{6}$? $\frac{1}{2} + \frac{1}{3} = \frac{5}{6}$?

$\frac{1}{2} + \frac{1}{3} = \frac{5}{6}$?

{6}



XAVIER SCHOOL, GAMHARIA

2nd Term Exam 2018-19

Class : III

Sub :-Moral Science

F.M. – 60

Date :- 13-10-2018

Time :- 2 hrs

I. Complete the prayer.

(1x10=10)

The _____ that I _____ to _____ to do,

Help me _____, to do them _____.

Let me not be _____ to try new things.

Let me be _____ for the _____ I have

and for a _____, full of _____ discoveries.

II. Put a '√' beside the things you should do and a 'X' beside the things you should not do.

(1x10=10)

- 1) Watching TV always.
- 2) Read story books during vacation.
- 3) Fight with everyone.
- 4) Obey your elders.
- 5) Help your mother.
- 6) Spend too much time on computer.
- 7) Pay attention in the class.
- 8) Be kind and helpful.
- 9) Hate everyone.
- 10) Be regular in school.

III. What would you choose to do in the following situations?

(2x5=10)

- 1) You have lost your friends book.
- 2) You do not like the food served for dinner.
- 3) Your friends have come to play but your parents have given you some job to do.
- 4) You want to buy a card from a shop, but you do not have the money.
- 5) You find a beautiful clip at school.

IV. Answer the following questions:

(3x5=15)

- 1) Write one thing that you do not know how to do and would like to learn.
- 2) Why do people sometimes take things that do not belong to them?
- 3) Think of one thing that you may have been spending too much time in doing and also think of one thing that you need to spend more time.
- 4) How often do you say ' I am bored ' and when?
- 5) What happens when people take something that does not belong to them?

V. Write five sentences on my hobby.

(1x5=5)

VI. Draw the following.

(2x5=10)

- 1) A thank you card for God to thank him for the beautiful world.
- 2) Any two natural things.

XAVIER SCHOOL, GAMHARIA

2nd Term Exam 2018-19

Class : III

Sub :-Mathematics

F.M. – 60

Date :- 03-10-2018

Time :- 2 hrs

I. Fill in the blanks. ---:.

(1x5=5)

- a) 4 times 8 is _____.
- b) 1 minute is equal to _____ seconds.
- c) April comes before _____ month.
- d) 1 year is equal to _____ days.
- e) 5 sets of 9 is _____.

II. Multiply the following-----:.

(1x5 =5)

- | | | |
|-----------------------------|-----------------------------|---------------------------|
| a) $40 \times 100 =$ _____ | b) $19 \times 100 =$ _____ | c) $20 \times 20 =$ _____ |
| d) $88 \times 1000 =$ _____ | e) $80 \times 1000 =$ _____ | |

III. Convert the following-----:.

(2x5=10)

- | | | |
|----------------------------|----------------------|------------------------|
| a) 3 hours into minutes | b) 7 weeks into days | c) 5 years into months |
| d) 40 minutes into seconds | e) 4 days into hours | |

IV. Multiply the following -----:.

(2x5=10)

- | | | |
|---|--|--|
| a) $\begin{array}{r} 318 \\ \times 8 \\ \hline \end{array}$ | b) $\begin{array}{r} 864 \\ \times 99 \\ \hline \end{array}$ | c) $\begin{array}{r} 552 \\ \times 78 \\ \hline \end{array}$ |
|---|--|--|

- | | |
|---|---|
| d) $\begin{array}{r} 7158 \\ \times 46 \\ \hline \end{array}$ | e) $\begin{array}{r} 9812 \\ \times 67 \\ \hline \end{array}$ |
|---|---|

V. Match the months with the events -----:.

(1x5=5)

- | | |
|--------------|------------------|
| a) January. | Gandhi Jayanti |
| b) March. | Independence day |
| c) August. | Republic day |
| d) October. | Children's day |
| e) November. | Holi |

VI. Write the addition form for the following -----:. **(1x5=5)**

- a) $15 \times 8 =$ b) $11 \times 7 =$ c) $14 \times 7 =$
d) $10 \times 6 =$ e) $13 \times 5 =$

VII. Convert the time into 24 hours clock format -----:. **(1x5=5)**

- a) 2:00 in the afternoon
b) 8:30 in the evening
c) 6:00 in the morning
d) 11:00 in the night
e) 1:30 in the afternoon

VIII. Multiply by using tables -----:. **(1x5=5)**

- a) $13 \times 4 =$ _____
b) $15 \times 6 =$ _____
c) $12 \times 7 =$ _____
d) $14 \times 8 =$ _____
e) $9 \times 8 =$ _____

IX. Draw the clock by showing time :-----. **(2.5x2=5)**

- a) 7:30
b) 5:15

X. Word problems -----:. **(2.5x2=5)**

- a) There are 406 ladoos in each box. How many ladoos are packed in 55 boxes?
b) In an orchard, there are 12 rows of mango trees. In each row, there are 178 mango trees. How many mango trees are there in the orchard?

XAVIER SCHOOL, GAMHARIA**2nd Term Exam 2018-19****Class : III****Sub :-Social Studies****F.M. – 60****Date :- 05-10-2018****Time :- 2 hrs****I. Fill in the blanks. (10)**

- 1) The topmost stripe of the National Flag is.....in colour.
- 2) is found on all currency notes.
- 3)established the East India Association.
- 4) was a leader of the Swadeshi and Boycott Movement
- 5) was assassinated on January 30, 1948.
- 6) The Agra Fort was built by Emperor..... in 1565.
- 7) In 2014..... was included in the list of classical languages of India.
- 8) Panchatantra was written by
- 9) The Ramayana describes Rama, the prince ofkingdom.
- 10) Panchatantra is a collection of.....

II. Match the following: (8)

- | | |
|------------------------|--|
| 1) Brihadeshwar Temple | a) Punjab Kesari |
| 2) Amber Fort | b) Gujarat, Rajasthan and Madhya Pradesh |
| 3) Mahatma Gandhi | c) Tanjore |
| 4) Leader of Radicals | d) Rajasthan |
| 5) Ghaghra | e) Sarnath Lion Capital |
| 6) Lala Lajpat Rai | f) Bal Gangadhar Tilak |
| 7) Satyameva jayate | g) Porbandar |
| 8) National Emblem | h) 'Truth alone triumphs' |

III. Answer in one word: (4)

- 1) Art of making a building-
- 2) Memorial building-
- 3) Love one's country and willingness to defend it-
- 4) A set of letters in which a language is written-

IV. Choose the correct answer: (10)

- 1) Who wrote the book 'Poverty and Un-British Rule in India'?
 a) Bal Gangadhar Tilak b) Dadabhai Naoroji c) S.N.Banerjee
- 2) The Lingraj Temple is dedicated to which God?
 a) Vishnu b) Shiva c) Brahma
- 3) The Red Fort and the Jama Masjid are situated in
 a) Agra b) Delhi c) Brahma
- 4) The Brihadeshwara Temple was built by
 a) Rajendra I b) Rajaraja I c) Rajendra II
- 5) Who said "Swaraj is my birthright and I shall have it"?
 a) Jawaharlal Nehru b) Mahatma Gandhi c) Bal Gangadhar Tilak

- 6) Who was considered his 'political guru' by Mahatma Gandhi?
a) Gopal Krishna Gokhale b) Dadabhai Naoroji
c) Pherozeshah Mehta
- 7) How many languages have been recognised by the Indian Constitution?
a) 24 b) 11 c) 22
- 8) Vishnu Sharma was invited by
a) King Sudarshan b) Ashoka c) Chandragupta Maurya
- 9) Our National song is
a) Jana-gana-mana b) Sara Jahan Se Achchha c) Vande Mataram
- 10) For the first time our National Anthem was sung in..... at the annual session of the Congress.
a) 1947 b) 1896 c) 1911

V. Write true or false: (8)

- 1) Every independent nation has a National Flag.
- 2) Our National Anthem is Vande Mataram.
- 3) The Lingraj Temple is dedicated to Lord Ganesha.
- 4) Meenakshi Temple is dedicated to Goddess Durga.
- 5) The Sanchi Stupa was built by Akbar.
- 6) King Sudarshan had three sons.
- 7) Jataka tales are associated with Jainism.
- 8) Rama was the son of King Dashratha.

VI. Answer the following questions: (7x2=14)

- 1) Which are the oldest Indian languages?
- 2) Who built the Taj Mahal and why?
- 3) Who organised the Ganapati and Shivaji festivals? Why?
- 4) What is written below our National Emblem?
- 5) How did Vishnu Sharma teach the princes?
- 6) Who has written our National Anthem?
- 7) Name the two ancient epics.
- 8) Write about the Jataka tales. (3-4 lines) (3)
- 9) Why should we protect and preserve our monuments? (3)

XAVIER SCHOOL, GAMHARIA

2nd Term Exam 2018-19

Class : III

Sub :-Science

F.M. – 60

Date :- 04-10-2018

Time :- 2 hrs

(Do not copy the questions.)

A. Give one word for the following: **(1x5=5)**

- 1) Freezing is the reverse of this process.
- 2) Substances that do not form a solution when mixed in water.
- 3) Seeds with two cotyledons.
- 4) The green pigment in leaves.
- 5) This is the most familiar form of water.

B. Fill in the blanks : **(1x10=10)**

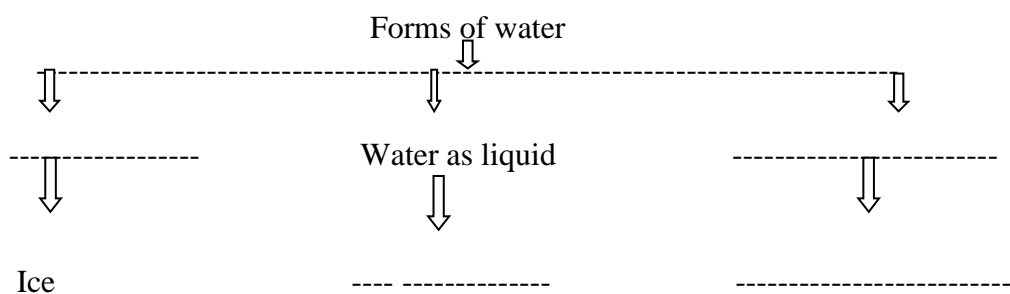
- 1) The process by which a liquid changes to solid is called-----.
- 2) Solute and solvent together form the -----.
- 3) Solid to liquid is to melting as -----is to condensation.
- 4) Feather is to ----- as coin is to sink.
- 5) ----- is the reverse of sublimation.
- 6) ----- is called the universal solvent.
- 7) Everything around us is known as -----.
- 8) ----- is the bark of a plant, used as spice.
- 9) Sugar is to ----- as water is to solvent.
- 10) Ice is ----- water.

C. State True or False. **(1x5=5)**

- 1) Water exists in four different forms.
- 2) A solution can be formed in less time if the solvent is cooled.
- 3) The substance that dissolves in water is called the solvent.
- 4) Everything around us is known as water.
- 5) Ice is a solid.

D. Cross (x) the odd one out. **(1x5=5)**

- 1) Juice, ink, scissor, milk
- 2) Bottle , water vapour, tank, jug
- 3) Mustard, groundnut, coffee, sunflower
- 4) Peach, banana, apple, mint

E. Complete the concept map.**(1x4=4)****F. Short answer questions :****(2x5=10)**

- 1) Name the different forms of water.
- 2) Define matter and give one example.
- 3) What happens when a tray with water is kept in a freezer?
- 4) Define solution.
- 5) What is evaporation?

G. Distinguish between:**(2x3=6)**

- 1) Melting and Condensation
- 2) Solute and Solvent
- 3) Freezing and Evaporation

H. Long answer questions :**(3x3=9)**

- 1) List any three conditions that affect the making of a solution.
- 2) Some objects float while some objects sink in water. Explain.
- 3) Write the different forms of matter and define them.

I. Draw and label "Types of phase transition."**(6)**

XAVIER SCHOOL, GAMHARIA

2nd Term Exam 2018-19

Class : III

Sub :-English Language

F.M. – 60

Date :- 06-10-2018

Time :- 2 hrs

- I. Write the antonyms for the following adverbs. (5)**
- | | |
|-------------|------------|
| 1. strongly | 4.smoothly |
| 2. forward | 5.loosely |
| 3. below | |
- II. Change the following adjectives into adverbs (5)**
- | | |
|------------|-------------|
| 1. Happy | 4.dangerous |
| 2. Nervous | 5.heavy |
| 3. Lazy | |
- III. Complete the sentence using suitable prepositions. (10)**
1. The cloths are __ the drawer.
 2. The clock is __ the wall.
 3. The calendar is __ the bed.
 4. The radio is s__ the floor.
 5. The chips have fallen __ of the packet.
 6. The lion jumped__ the well.
 7. There is a roof __ our heads.
 8. The Sun was hidden __ the clouds.
 9. He came __ the pool after two hours.
 10. I have studied in this school __ 2014.
- IV. Complete the sentence by adding adverbs. (5)**
1. She placed the flowers__ in the basket.(gentle)
 2. Miranda followed her mother’s instructions__.(careful)
 3. It rained__ for days and days.(heavy)
 4. We cheered__ for our school team.(loud)
 5. The dog lay__ on the porch.(lazy)
- V. Rewrite the sentences in the past tense. (2X5=10)**
1. They get along fairly well.
 2. She keeps her books on the table.
 3. The boy stands on the footpath.
 4. Amit writes a letter to his friend.
 5. The aeroplane flies high.
- VI. Write the past tense of the verbs given below. (5)**
- | | |
|----------|--------|
| 1. speak | 4.draw |
| 2. drive | 5.cry |
| 3. teach | |

VII. Fill in the blanks with is, are or an.**(5)**

1. There apples__ ripe and sweet.
2. I__ watching that dolphin swim.
3. Today the sun__ very bright.
4. Shreya__ reading a book.
5. You__ very smart and intelligent.

VIII. Write a paragraph on “Teachers’ Day” (80 – 100 words)**(10)****IX. Make sentences****(5)**

1. Ripe
2. Swim
3. Birthday
4. Soldier
5. Candle

