

XAVIER SCHOOL, GAMHARIA

1st Term Exam 2018-19

Class : II

Sub :-Computer Applications

F.M. – 60

Q1. Answer the following :-

(2*10=20)

1. Mention the three –steps process on which a computer works?
2. Write one advantage and one disadvantage of a computer?
3. Write any 2 places where computers are used?
4. How audio and video aid is useful for both students and teachers?
5. Name the main parts of a computer?
6. What is other name of headphones?
7. Which part of computer looks like TV?
8. What is role of internet in education and learning?
9. Write one use of computers in Railway stations and airports?
10. Which part of computer works on data to give the output?

Q2. Match the following: -

(1*5=5)

- | | |
|-----------------------------|--------------------------|
| 1. Make lessons interactive | a. Books and newspapers |
| 2. To print bills | b. Schools |
| 3. Designing and Printing | c. Audio and Visual aids |
| 4. Making timetable | e. Railways and Airports |
| 5. To book tickets | f. Shops |

Q3. Fill in the blanks :-

(1*10=10)

1. I love to play games on a computer at my _____.
2. My teacher uses computer in the _____ for preparing report cards.
3. CD stands for _____.
4. A mouse has _____ buttons on it.
5. A _____ is used to record our voice into a computer.
6. _____ and _____ in a computer can be presented in a beautiful way.
7. Working on the data is called _____.
8. A computer is a good source of _____.
9. A computer with Internet acts as a ocean of _____.
10. Computers are used in _____ for keeping the details of accounts.

Q4. Arrange the jumbled words :-

(1*5=5)

- | | | |
|-------------|--------------|-------------|
| 1. YEKROADB | 2. VDD | 3. KSEPAERS |
| 4. ROTINOM | 5. CALSSRMOO | |

Q5. Draw the following parts of computer and colour it :-

(1*5=5)

1. Monitor
2. Pen drive
3. CPU
4. Headphones
5. Mouse

Q6. Write (TRUE) or (FALSE) :-

(1*5=5)

1. Speakers are used to record sound. ()
2. Inkjet is a kind of Printer. ()
3. Education is limited to classroom only. ()
4. You can get material on any topic from Internet. ()
5. Computers are used in offices for calculating marks. ()

Q7. Answer in one word :-

(1*5=5)

1. Name the part of a computer which is used to draw pictures and play games?
2. Which key brings the cursor to next line?
3. The printed copy on a paper is called?
4. Which part of a computer is used to input the data?
5. Which part of a computer works like a human brain?

Q8. Tick the right answer :-

(1*5=5)

1. What are the data and instructions together known as?
a. Output b. Process c. Input
2. Which among the following is the feature of a computer?
a. Slow b. Multitasking c. Emotional
3. Which part of a computer works like a human brain?
a. CPU b. Monitor c. Printer
4. _____ is used to withdraw money.
a. Car b. Tablet computer c. ATM

XAVIER SCHOOL, GAMHARIA

1st Term Exam 2018-19

Class : II.....


Sub :-Drawing

F.M. – 25

Name :-

Roll. No. :-

Ques . 1 Colour the given picture



Ques 2 . Draw and colour a glass of juice.

XAVIER SCHOOL, GAMHARIA

1st Term Exam 2018-19

Class : II

Sub :-English Language

F.M. – 60

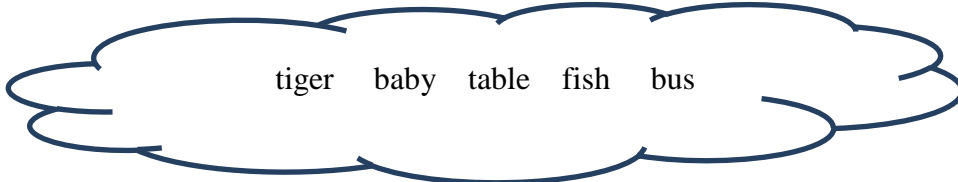
Q 1. Fill in the missing punctuation.

(5*1= 5)

- a) When is your birthday.....
- b) We study in Xavier School.....
- c) Who is the principal of your school....
- d) Red Yellow and blue are primary colours .
- e) Can you ride a bicycle....

Q 2. Fill in the blanks with suitable nouns.

(5* 1=5)



- a) A lives in water.
- b) I go to school by
- c) The is crying .
- d) A lives in a den .
- e) She keeps her books on the

Q 3. Write a proper noun for the given common noun.

(5*1=5)

- a) river
- b) festival
- c) day
- d) girl
- e) country

Q4. Write the plural form of the following nouns .

(10*1=10)

- a) calf
- b) life
- c) paper
- d) fairy
- e) fox
- f) goose
- g) tooth
- h) dish
- i) child
- j) deer

Q 5. Write the feminine gender

(10 * 1= 10)

- a) actor
- b) father
- c) bridegroom
- d) nephew
- e) host
- f) king
- g) bachelor
- h) monk
- i) son
- j) man

Q 6. Pick out the nouns from the box and write the countable nouns in column A and uncountable in column B

(5 * 1 =5)

oil	cars	sauce	water	spoons
oranges	coffee	balloons	soup	eggs

Column A

- a.
- b.
- c.
- d.
- e.

Column B

- a.
- b.
- c.
- d.
- e.

Q 7. Complete using 'some' or 'any'

(4*1/2 = 2)

- a) Do you have money with you ?
- b) There are mangoes in a bowl .
- c) Are there roses in the garden ?
- d) Please give me water to drink .

Q.8. Complete using 'many' or 'much'

(4*1/2 =2)

- a) How butter did you buy ?
- b) How children do they have ?
- c) Howeggs do we need ?
- d) How milk is left in the bottle ?

Q 9. Write a composition in 100 words on 'My Pet'.

(5)

Read the following passage and answer the questions that follow.

The Lion and the Mouse

One day a mouse went out to find something to eat. He ran carelessly through some tall grass. He ran into a fierce lion. The lion caught the mouse. 'Please let me go, Mr. Lion', said the mouse. 'One day I will help you'. The lion laughed . 'How could a little mouse help a big lion ?' he thought, but let the mouse go. The mouse was very grateful to the lion.

The next week the mouse saw the lion was tied tightly in a net. 'I will help you' said the mouse'. He bit through the ropes . His teeth were sharp . Soon the lion was free. He said 'Thank you very much' to the mouse .

Q11. Put in the missing words

(6*1=6)

- a) A mouse was looking for to eat .
- b) He ran into a..... lion .
- c) The lion the mouse.
- d) The mouse said , 'One day I will you ' .
- e) The lion was in a
- f) The mouse through the ropes.

Q11. Find the opposite of the following words in the passage.

(2*1 =2)

- a) carefully ×
- b) short ×

Q12. Make sentence

(2 *1 =2)

- a) sharp
- b) net

➤ **1 mark will be given for neatness.**

XAVIER SCHOOL, GAMHARIA

1st Term Exam 2018-19

Class : II

Sub :-English Literature

F.M. – 60

- I. Write the meanings of the words given below:.** (6*1=6)
i) cross ii) swell iii) mine iv) merrily v) trotted vi) chopdown
- II. Write the opposites of the following words:.** (8*1=8)
i) Dirty ii) sharp iii) high iv) old v) useless vi) shy
vii) safely viii) shouted
- III. Write the rhyming words of the words given below.** (7*1=7)
i) Cried ii) tight iii) sliding iv) Tossed v) new vi) old
vii) tree
- IV. Write true or false:.** (7*1=7)
1) Amit had a toy car.
2) Randolph was a show-off.
3) Amit's mother found his toy rabbit.
4) The tree was the home of birds.
5) Randolph carried the little boy on his back.
6) There was a mango tree in the farmer's garden.
7) Amit's parents took him and his sister to a park.
- V. Fill in the blanks:** (6*1=6)
1) Amit and his sister were very _____.
2) Randolph was a _____.
3) Randolph was very _____.
4) Amit _____ his rabbit tightly.
5) One day the farmer decided to cut down the _____.
6) There was a beehive in the _____ of the tree.
- VI. Make Sentences:** (4*1=4)
1) Parents
2) Tree
3) Children
4) Bumpy
- VII. Answer the following questions:** (6*2=12)
1) How did Amit's family go to the fair?
2) Why was the boy crying?
3) Why did the farmer want to cut down the tree?
4) What did Randolph find on the ground?
5) Who found Amit's rabbit?
6) What did Amit's mother want him to do with his toy rabbit?

VIII. Write the first six lines of the poem 'There are Big Waves':

(6*1=6)

IX. Complete these phrases:

(4*1=4)

1) roar like _____

2) as blue as _____

3) as cold as _____

4) shine like _____

XAVIER SCHOOL, GAMHARIA

1st Term Exam 2018-19

Class : II

Sub :-EVS

F.M. – 60

I. Fill in the blanks:-

(10)

- 1) Playing games keep us fit and.....
- 2)is the main source of water.
- 3) We should store drinking water in..... and closed containers.
- 4) We get..... fibres directly from plants and animals.
- 5)games are played in open grounds.
- 6) clothes protect us from getting wet during rainy season.
- 7) Food which taste good but is not healthy is called..... food.
- 8) Rain water that goes deep into the ground is called.....
- 9) Drink at least glasses of water every day.
- 10) is light and dries easily. It is good for rainy season.

II. Choose the correct answer. There may be more than one correct answer:

(5)

- i) Plants need water to
 - a) Make food
 - b) Be dry
 - c) Stay alive
- ii) Some natural sources of water are
 - a) Sea
 - b) River
 - c) Hand pump
- iii) Energy giving food gives us energy to
 - a) Play
 - b) Work
 - c) Protect us
- iv) Human beings need water to
 - a) waste
 - b) Cook
 - c) Drink
- v) Clean drinking water has
 - a) No taste
 - b) No colour
 - c) Bad smell

III. Write True or False:-

(10)

- 1) Khichdi and porridge are easy to chew and digest.
- 2) Repair leaking taps and water pipes to help save water.
- 3) Every game has a set of rules to play.
- 4) Man- made fibres are also called synthetic fibre.
- 5) We can wear canvas clothes only in rainy season.
- 6) Following the rules of games leads to fight.
- 7) A well is a natural source of water.
- 8) Old stored water may be used to water the plant.
- 9) The entire team wins or loses the games in a team game.
- 10) Water helps to keep waste material inside our body.

IV. Match the following:

(5)

- | | |
|-------------------------|-------------------------------------|
| 1) Milk | a) body-building food |
| 2) Ludo, chess | b) Junk food |
| 3) Burgers and chips | c) makes our bones and teeth strong |
| 4) Ropes, doormat, bags | d) Indoor games |
| 5) Eggs, fish | e) things made from jute. |

V. Answer the following questions:-

(2x10=20)

- 1) What are team games?
- 2) How does body building food help us?
- 3) Write two ways by which water gets polluted.
- 4) Why do we wear cotton clothes in summer?
- 5) Write one way to save water.
- 6) How do woollen clothes keep us warm?
- 7) How does protective food help us?
- 8) Who loses or wins in an individual game?
- 9) Name two man-made sources of water.
- 10) Name two games that can be played individually as well as in a team.

VI. Write any two food items we get from-

(4)

- a) Plants- b) Animals-

VII. 1) Draw any one thing you use while playing cricket.

(2x3=6)

- 2) Draw any one 'Source of water'.

XAVIER SCHOOL, GAMHARIA

1st Term Exam 2018-19

Class : II

Sub :-General Knowledge

F.M. – 60

1. Complete the following animals table.

(1x10=10)

	Male	Female	Baby
a) Goat	kid
b) Duck	duck
c) Horse	stallion
d) Elephant	bull	cow
e) swan	pen	cygnet
f) Peafowl	peahen

2. Fill in the blanks

(2x10=20)

- is rich in vitamin C, and is good for the heart and skin. It is also known as ‘shareefa’ or ‘sitaphal’. (Custard apple / Pomegrante)
- is a root vegetable. (Spinach / Turnip)
- is commonly known as the Indian gooseberry is one of the richest sources of vitamin C. (Peach / Amla)
- Rabbit eats..... . (Carrot / Bamboo)
- is known as steel city of India. (Jamshedpur / Kolkata)
- A..... can see six to eight times better than humans at night. (Cat / Goat)
- makes over 200 different sounds to communicate. (Chickens / Lion)
- The birthday of Jawaharlal Nehru is celebrated as..... (Teacher’s Day / Children’s Day)
- produces honey. (Silkworm / Bee)
- is called city of Nawabs. (Jaipur / Lucknow)

XAVIER SCHOOL, GAMHARIA

1st Term Exam 2018-19

Class : II

Sub :-General Knowledge

F.M. – 60

1. Complete the following animals table.

(1x10=10)

	Male	Female	Baby
a) Goat	kid
b) Duck	duck
c) Horse	stallion
d) Elephant	bull	cow
e) swan	pen	cygnet
f) Peafowl	peahen

2. Fill in the blanks

(2x10=20)

- is rich in vitamin C, and is good for the heart and skin. It is also known as ‘shareefa’ or ‘sitaphal’. (Custard apple / Pomegrante)
- is a root vegetable. (Spinach / Turnip)
- is commonly known as the Indian gooseberry is one of the richest sources of vitamin C. (Peach / Amla)
- Rabbit eats..... . (Carrot / Bamboo)
- is known as steel city of India. (Jamshedpur / Kolkata)
- A..... can see six to eight times better than humans at night. (Cat / Goat)
- makes over 200 different sounds to communicate. (Chickens / Lion)
- The birthday of Jawaharlal Nehru is celebrated as..... (Teacher’s Day / Children’s Day)
- produces honey. (Silkworm / Bee)
- is called city of Nawabs. (Jaipur / Lucknow)

3. Match the following.

(1x10=10)

- | | |
|---------------------|-------------|
| a) Bear | Nuts |
| b) Mahabaleshwar | Film actor |
| c) Christmas | Maharashtra |
| d) Frog | Santa Claus |
| e) Amitabh Bachchan | Broccoli |
| f) Flower vegetable | Meat |
| g) Squirrel | Bamboos |
| h) Panda | Fish |
| i) Silkworm | Insects |
| j) Lion | Silk |

4. State the following True or False.

(2x5=10)

- Coriander is a root vegetable
- The stem holds the plant straight.
- I go to the pandals and pray to Goddess Durga in Diwali.
- Indra Nooyi is the chairperson and Chief Executive officer of Pepsico.
- A lamb identifies its mother by its bleat.

5. Answer the following questions with the help of given clues.

(2x5=10)

- Which insect gives us silk?
- I sprinkle colours with pichkari and eat gujyas on this day.
- Where is Mount Abu?
- Who is the Chief Executive officer of Google?
- Which city is known as city of joy?

3. Match the following.

(1x10=10)

- | | |
|---------------------|-------------|
| a) Bear | Nuts |
| b) Mahabaleshwar | Film actor |
| c) Christmas | Maharashtra |
| d) Frog | Santa Claus |
| e) Amitabh Bachchan | Broccoli |
| f) Flower vegetable | Meat |
| g) Squirrel | Bamboos |
| h) Panda | Fish |
| i) Silkworm | Insects |
| j) Lion | Silk |

4. State the following True or False.

(2x5=10)

- Coriander is a root vegetable
- The stem holds the plant straight.
- I go to the pandals and pray to Goddess Durga in Diwali.
- Indra Nooyi is the chairperson and Chief Executive officer of Pepsico.
- A lamb identifies its mother by its bleat.

5. Answer the following questions with the help of given clues.

(2x5=10)

- Which insect gives us silk?
- I sprinkle colours with pichkari and eat gujyas on this day.
- Where is Mount Abu?
- Who is the Chief Executive officer of Google?
- Which city is known as city of joy?

XAVIER SCHOOL, GAMHARIA

1st Term Exam 2018-19

Class : II

Sub :-Hindi Language

F.M. – 60

1. नीचे दिए गए शब्दों से उन शब्दों को छाँटकर पुनः लिखो :-

(5)

मगला , गमला , छतरी , खारच , तरीच , लिइम , तैराक ,
रामकै

तरऔ , अनार , ऐनक

2. नीचे दिए शब्दों में वर्णों का क्रम सही करके उचित शब्द बनाइये :-

(5)

तवालर , ताकिब , लहम , वरनजा , क्स्पुत

3. शब्दों को सही क्रम में लिखकर वाक्य बनाओ :-

(4)

क) खेल हैं रहे बच्चे

ख) नेहा है रही सो

ग) गाना है गा लड़का रहा

घ) सैर रहे हैं कर दादा जी

4. दी गई स्वरों के मात्राएँ लिखो एवं उससे तीन तीन शब्द लिखो :-

(9)

ओ -

.....

ऐ -

.....

ऋ -

.....

5. दो-दो नाम लिखो :-

(4)

क) नदियाँ -

.....

ख) पहनने के कपडे -

.....

ग) बरतन -

.....

घ) पीनेवाली चीजें -

.....

6. खाली जगह भरो :-

(9)

1. स्वरों के निश्चित चिह्नकहलाते हैं।
2. स्वरकी अपनी कोई मात्रा नहीं होती।
3. आ,इ, व की मात्रा व्यंजन के दाईं ओर लगाई जाती है।
4. व की मात्रा व्यंजन के ऊपर लगती है।
5. सभीमें अ लगा रहता है।
6. वर्णों के अर्थपूर्ण मेल कोकहते हैं।
7. ज , फ़ और ऑ दूसरी भाषाओं से आने के कारण ये वर्णवर्ण कहलाते हैं।

8. शब्द बनाते समय जब दो व्यंजन को एक -दूसरे से जोड़ा जाता है तबव्यंजन बनते हैं।

9. र में उ और ऊ की मात्रा र केमें लगती है।

7. इनसे दो दो शब्द बनाओ :-

(10)

- क) न्न -
- ख) टठ -
- ग) क्ख -
- घ) त्थ -
- ड) स्त -

8. संज्ञा शब्द लिखकर वाक्य पूरे करो :-

(5)

- क) मेरा नामहै।
- ख) मैं दूसरीमें पढ़ता हूँ।
- ग)मेरा/मेरी सबसे अच्छा दोस्त /अच्छी सहेली है।
- घ) मैंमें बैठकर स्कूल जाता /जाती हूँ।
- ड) मुझेखेलना बहुत पसंद है।

9. 'मेरा विद्यालय' के बारे में पाँच पंक्तियाँ लिखो :-

(5)

10. नीचे दिए गए वर्णों में मनचाही मात्रा लगाकर दो-दो शब्द बनाओ :-

(4)

- क) म, न -
- ख) म, ल -
- ग) प, स -

XAVIER SCHOOL, GAMHARIA

1st Term Exam 2018-19

Class : II

Sub :-Hindi Literature

F.M. – 60

1) नीचे दिये गए प्र नों के उत्तर लिखो :-

(14)

- क) तितली को फूलों की रानी क्यों कहा जाता है?
ख) तितली हरे भरे उपवन में क्या करने आई है?
ग) तान्या और मीतू कौन थी ?
घ) पेड़ -पौधे हमें क्या - क्या चीजे देते है ?
च) नन्हे बीज का घर कहाँ था ?
छ) नन्हे बीज के मन में क्या लालच आ गया ?
ज) नन्हे बीज ने धरती पर आकर क्या देखा ?

2) शब्दों के अर्थ लिखो :-

(8)

चंचल , पर , धूम , अतिरिक्त , वायु , मधुर , प्रकाश , खूबसूरत

3) सही शब्द चुनकर वाक्य पूरे करो :-

(3)

- क) तितली के पंख ----- होते है ।
सफेद लाल रंग - बिरंगे
ख) तितली को ----- रानी कहा जाता है।
कलियों की फूलों की भँवरों की
ग) तितली -----उपवन में मनमानी करने आयी है ।
हरे - भरे सूखे गंदे

4) अक्षरों में मात्र बदलकर नए शब्द बनाइये :-

(3)

- क) ब ल ----- , -----
ख) क ल ----- , -----
ग) म ल ----- , -----

5) सही () और गलत () का निशान लगाइए :-

(4)

- क) बूंद की आवाज सुनकर नन्हा बीज डर गया । ()
ख) नन्हा बीज धरती पर आकर दुखी था । ()
ग) बगीचे में तरह तरह के सुंदर फूल थे । ()
घ) सभी फूल धरती पर नन्हें बीज के आने से प्रसन्न थे । ()

6) अनुस्वार () और चंद्रिंबंदू () वाले शब्द लिखो ।

(6)

अनुस्वार

चंद्रिंबंदू

7) नीचे दिए वाक्य किसने कहे ।

(4)

क) “ पेड़ -पौधे हमारे सच्चे मित्र होते हैं ।“

ख) “ कच्चा आम तो आचार बनाने के काम भी आता है ।“

ग) “ वे भी पेड़ों की छाया में आराम करते हैं ।“

घ) “ उनकी लकड़ी फर्नीचर बनाने के काम आती है ।“

8) शुद्ध शब्दों पर () लगाओ ।

(5)

() सनसार

() संसार

() रूसार

() आक्सीजन

() आकसीजन

() आओक्सीजन

() बीमार

() बिमार

() बीमर

() परिवार

() प्रीवर

() परिवर

() सब्जियों

() सब्जियाँ

() सबर्जीं

9) लिंग बदलो :-

(6)

सहेली -----

सब्जी -----

पत्ती -----

डाली -----

दवाई -----

खुशी -----

10) अपने घर के आस- पास पाये जाने वाले पाँच पेड़ - पौधों के नाम लिखो ।

(5)

11) नए शब्द बनाओ :-

(2)

ञ्च	बञ्चा	-----
च्छ	अच्छा	-----

XAVIER SCHOOL, GAMHARIA

1st Term Exam 2018-19

Class : II

Sub :-Moral Science

F.M. – 60

Name :- _____ Roll No: _____

I. Complete the prayer. (10)

Thank you God for the love I..... .
Let me in..... give others my..... .
..... me God to always be loving,
To..... others as I would like to treat me.

II. Write true or false. (5)

- a. It is important to keep our surroundings clean. – _____
- b. Animals do not have feelings.- _____
- c. All animals are God’s creation.- _____
- d. Burning garbage makes the air dirty.- _____
- e. We can be cruel to animals.- _____

III. Fill in the blanks. (10)

- 1. A dog helps us to..... our home.
- 2. WWF stands for world.....fun.
- 3. We all need to be good at.....
- 4. We should be..... to all creatures.
- 5. A dog is a..... animal.
- 6. Animals are also a part of our.....
- 7. Animals are used to carry.....
- 8. People with good heart are always.....by the God.
- 9. and..... are the pillars of a person with a good heart.

IV. Unscramble the jumble words. (10)

- 1. USDBTIN -
- 2. EAHART -
- 3. EELFNIG -
- 4. ANILSMA -
- 5. WEEPS -

V. Answer the following questions. (2x6=12)

Q1. How should we treat animals?

Ans.
.....

Q2. How can we keep our surroundings clean?

Ans.
.....

Q3. Write two ways to take care of animals.

Ans.
.....

Q4. Why do animals move from one place to another?

Ans.
.....

Q5. Name the zoo which is near to your house.

Ans.....

Q6. Which animal is known as 'The Ship of the Desert'?

Ans

VI. Write three jobs that are needed to be done to keep your classroom clean. (3)

Ans.
.....
.....

VII. Mention any five occasions in which we enjoy with our family. (3)

Ans.....
.....

VIII. Draw any two things that are useful to us to keep our surroundings clean. (5)

--	--

2 marks for neatness.

XAVIER SCHOOL, GAMHARIA

1st Term Exam 2018-19

Class : II

Sub :-Mathematics

F.M. – 60

I. Write the number which is 10 greater than the following numbers : (½ x 4 = 2)

a. 146 _____ b. 239 _____ c. 602 _____ d. 377 _____

II. Write the number which is 10 less than the following numbers : (½ x 4 = 2)

a. 542 _____ b. 386 _____ c. 759 _____ d. 810 _____

III. Calculate and match the following : (1 x 4 = 4)

a. $24 + 4$ 28

b. $16 - 4$ 25

c. $34 - 8$ 55

d. $48 + 7$ 26

IV. Write the numbers in expanded form : (1 x 2 = 2)

a. $947 =$ b. $208 =$

V. Write in compact form : (½ x 2 = 1)

a. $400 + 10 + 6 =$

b. $600 + 50 + 0 =$

VI. Write the place value of the underlined numbers (½ x 2 = 1)

a. $6 \underline{0} 3 =$ b. $\underline{4} 9 7 =$

VII. Write in words: (1 x 2 = 2)

a. $907 =$ b. $712 =$

VIII. What comes after and before : (½ x 8 = 4)

a. _____809_____ b. _____399_____

c. _____639_____ d. _____600_____

IX. Write in ascending order : (1 x 2 = 2)

a. 374, 473, 347, 437.

b. 845, 485, 548, 584.

X. Write in descending order : (1 x 2 = 2)

a. 795, 975, 597, 957

b. 863, 368, 386, 836.

XI. Add the following numbers : (1½ x 2 = 3)

a. 7 0 5

+ 1 6 3

b. 3 5 4

+2 3 1

XII. Addition with carryover : (2 x 2 = 4)

a. 8 7

+ 1 8

b. 4 2 8

+1 9 9

XIII. Word problem on addition : (2 x 3 = 6)

a. A garden has 503 rose plants and 254 sunflower plants. How many plants are there in the garden ?

b. Rani made 326 paper boats. Sunita made 294 paper boats. How many paper boats did they made altogether ?

XIV. Subtract the following numbers : (1½ x 2 = 3)

a. 3 8 3

+ 1 5 2

b. 4 9 4

+2 0 1

XV. Subtraction with borrowing : (2 x 2 = 4)

a. 9 0

- 5 9

b. 4 5 6

- 1 8 7


XVI. Word problem on subtraction : (2 x 3 = 6)

a. There were 365 apples in a basket, 124 apples were rotten. How many apples were fresh ?

b. Rohan purchased 236 toffees on his birthday. He distributed 178 of them among his friends. How many toffees are left with him ?

XVII. Draw and continue the patterns :

($\frac{1}{2} \times 10 = 5$)



XVIII. Observe and complete the pattern :

($\frac{1}{2} \times 10 = 5$)

1) A E I O U _____

2) 100 200 300 400 _____

3) 40 38 36 34 _____

4) 10 9 8 7 _____

5) ABC BCA CAB ABC _____

XIX. Colour the pattern with the given clues :

(2)

A = red

B = yellow

C = green

C	A	B	C	A	B	C	A	B
---	---	---	---	---	---	---	---	---