

XAVIER SCHOOL, GAMHARIA

3rd Term Exam 2018-19

Class : I.....

Sub :-Computer Applications

F.M. – 60

Date :- 06-02-2019

Time :- 2 hrs

Name :-

Roll. No. :-

I. Fill in the missing letters: -

(2x4=8)

- a) S__A__EB__R K__Y
- b) RE__RI__E__AT__R
- c) B__C__S__A__E KEY
- d) S__OR__G__DE__ICE

II. Match the following with the correct words: -

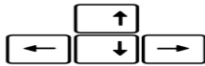
(2x4=8)

- | | |
|------------------|------------|
| 1) refrigerator. | a) books |
| 2) cupboard. | b) CD |
| 3) school bag. | c) fruit |
| 4) computer. | d) clothes |

III. Identify the given pictures and write its name:-

(2x3=6)

1.



2.



3.



IV. Write true or false:-

(1x5=5)

- 1. A computer can store only sound in storage devices. _____
- 2. You should always sit too close to the computer. _____
- 3. A memory card is very big in size. _____
- 4. We cannot store data in a CD. _____
- 5. Storage places are used to store things. _____

V. Fill in the blanks:-

(1x5=5)

- a) The _____ key is used to add black spaces between words.
- b) A _____ is small in size.

- c) A computer stores data in its _____ .
- d) The arrow keys are _____ in number.
- e) Hard disk is fixed inside the _____ cabinet.

VI. Read the clues given and answer in one word: - (2x3=6)

- a) It has a neck, but no head, but still it wears a cap -> _____
- b) I store all data and information and work according to the given orders -> _____
- c) I am a rectangular box in which you keep pencils, eraser, scale and colours -> _____

VII. Guess! Who am I ? (2x3=6)

- a) I make the letters appear in capital- _____
- b) You store your clothes and toys- _____
- c) The small arrow moving on the monitor- _____

VIII. Answer in one word:- (2x4=8)

- 1) Which storage device is round in shape? _____
- 2) Which finger must be placed on the left mouse button? _____
- 3) Where do we store fruits, vegetables and cold drinks? _____
- 4) What do we call the small arrow on the monitor? _____

IX. Answer the following questions in one or two sentences:- (2x4=8)

- 1) What do you store in a school bag?
.....
.....
- 2) What is the use of Scroll wheel?
.....
.....
- 3) What can you store in a CD or a Pen Drive?
.....
.....
- 4) Write any one good manner that should be followed in the computer room.
.....
.....

XAVIER SCHOOL, GAMHARIA

3rd Term Exam 2018-19

Class : I.....

Sub :-Drawing

F.M. – 25

Date :- 15-02-2019

Time :- 2 hrs

Name :-

Roll. No. :-

Q. 1 Colour the given picture -

(10)



Q.2 Draw and colour big Traffic light.

(15)

XAVIER SCHOOL, GAMHARIA

3rd Term Exam 2018-19

Class : I.....

Sub :-English Language

F.M. – 60

Date :- 12-02-2019

Time :- 2 hrs

Name :-

Roll. No. :-

A. Match the objects that go in pairs: (5)

Tables	Key
Pencils	Butter
Shoes	Chairs
Bread	Erasers
Lock	Socks

B. Rewrite the sentences using ‘AND’ : (5)

1) Mary can sing/dance.

.....

2) I eat fruits/vegetables.

.....

3) I have a new shirt/pant for the party.

.....

4) The painter is painting all the tables/chairs.

.....

5) I lost the lock/key to our front door.

.....

C. Make sentences with the following pictures: (6)

1)





2)

3)



D. Read the paragraph carefully and answer the following questions:

TOUCH A STAR

One night Josh and Grandpa went for a walk. “Look at all the stars, Grandpa,” said Josh.” I wish I could touch a star.”

The next day Josh and Grandpa went to the beach. “Come with me, Josh, ”said Grandpa. “I have a surprise for you.”

They walked along the beach until they came to a small pool of water. “Close your eyes and hold out your hands, ” said Grandpa.

In a moment, Josh felt something in his hands. He opened his eyes and saw a starfish. “Thanks, Grandpa, “he said. “You made my wish come true!”

➤ **Write opposites:** (4)

1. night _____

3. walk _____

2. opened _____

4. true _____

➤ **Match the rhyming words:** (5)

1. walk	Dealt
2. touch	Banks
3. pool	Talk
4. thanks	Much
5. felt	Cool

F. Join and rewrite the sentences using “AND”:

(5)

1. The sun rises in the east. The sun sets in the west.

2. Our class teacher is very kind. Our class teacher is very caring.

3. Mother gifted me a pretty dress. Mother gifted me a watch.

4. I want to eat an apple. I want to eat a banana.

5. Father likes to wash his car on Sundays. Father likes to wash his bike on Sundays.

G. What are they ‘going to’ do?

(3)

1. Prem is holding a bat.

2. Maya is turning on the tap.

3. Anu is holding the duster.

H. Write in simple past tense:

(12)

PRESENT	PAST	PRESENT	PAST
Go		Sit	
Come		Get	
Say		Buy	
Wear		See	
Eat		Draw	
Write		Stand	

I. What do they do?

(4)

a) A clown is a funny person.

b) A weightlifter is a strong person.

c) A firefighter is a brave person.

d) A thief is a bad person.

XAVIER SCHOOL, GAMHARIA

3rd Term Exam 2018-19

Class : I.....

Sub :-English Literature

F.M. – 60

Date :- 05-02-2019

Time :- 2 hrs

Name :-

Roll. No. :-

A. Fill in the blanks.

(5)

Stop! Look! Listen! Think!

_____ Look! _____ .

When you cross the street

_____ to _____ .

Look to the left.

_____ to _____ .

B. Write the meaning of the given words.

(5)

a) listen- _____

b) hurt-- _____

c) afraid- _____

d) little-- _____

e) soft-- _____

C. Write rhyming words for the following words.

(10)

a) match _____

f) moo _____

b) catch _____

g) way _____

c) follow _____

h) now _____

d) fine _____

i) you _____

e) think _____

j) time _____

D. Write opposites of the following words.

(10)

a) stop x _____

aunt x _____

b) begin x _____

soft x _____

c) asked x _____

again x _____

d) afraid x _____

safe x _____

e) noise x _____

front x _____

E. Make sentences from the following words.

(10)

a) look- _____

b) place- _____

- c) farm-_____
- d) loud-_____
- e) fine-_____

F. Write true (T) or false (F) for the given statements. (5)

- a) At last Jim was not afraid of Daisy. ()
- b) Jim was afraid of Daisy , the cow. ()
- c) Jim likes the animals of Aunt Katie’s farm. ()
- d) Daisy makes a loud noise “moo” sound when Jim pats her. ()
- e) Daisy stares at Jim with great blue eyes. ()

G. Give one word answer. (5)

- a) Who were going to watch the cricket match?

Ans:- _____

- b) What did they ride to reach the ground ?

Ans:- _____

- c) Who sits on little stool and milk Daisy?

Ans:-_____

- d) Who stares with great brown eyes?

Ans:-_____

- e) Who likes the animals on Aunt Katie’s farm?

Ans:-_____

H. Who said to whom? (5)

- a) “moo”

Ans:-_____

- b) “It’s time to milk her.”

Ans:-_____

- c) “That is not a bear. “

Ans:-_____

- d) “The green light says go. “

Ans:-_____

- e) “Yes, let us go.”

Ans:-_____

I. Answer the following questions.

(5)

a) Why Jim was afraid of the bear with the horns?

Ans.....
.....
.....

b) Why does Daisy make loud noise at Jim?

Ans.....
.....
.....

XAVIER SCHOOL, GAMHARIA

3rd Term Exam 2018-19

Class : I.....

Sub :-EVS

F.M. – 50

Date :- 07-02-2019

Time :- 2 hrs

Name :-

Roll. No. :-

A. Fill in the blanks by choosing correct word from the given box:

(10x1=10)

sunny	stars	communication	moon	internet
air	land transport	cotton	writing	sailor

- 1) Sharing of ideas, thoughts and feeling with other is called _____.
- 2) _____ help us to communicate by reading, writing, seeing and listening.
- 3) We see different shapes of the _____ every night.
- 4) When sun shines brightly in the sky, it is called a _____ day.
- 5) We see the _____ twinkling in the night.
- 6) We wear light _____ clothes in summer.
- 7) Our earth is surrounded by a layer of _____.
- 8) SMS is an example of communication by _____.
- 9) A _____ sails a ship.
- 10) Vehicles that move on land are called _____.

B. Name two vehicles for each of the following:

(5x2=10)

- 1) Vehicles which move on road _____
- 2) Vehicles which move on water _____
- 3) Vehicles which move in the air _____
- 4) Vehicles which move on railway track _____
- 5) Vehicles which are special _____

C. Circle the odd one out:

(5x1=5)

- 1) cycle ship yacht
- 2) drivers pilot television
- 3) tram letter email
- 4) radio letter e mail
- 5) raincoat gumboots woollen clothes

D. Answer in one word :

(5x2=10)

- 1) A person who flies an aeroplane. _____
- 2) It carries letters and parcels. _____
- 3) It carries fire fighter . _____
- 4) It takes injured people to a hospital. _____
- 5) Time of the day when the sun sets. _____

E. Match the following:

(5x1=5)

- | | |
|------------------------------|---------------|
| 1) band of seven colour | The sun |
| 2) dark sky | early morning |
| 3) bright and sunny day | afternoon |
| 4) pleasant and not very hot | rainbow |
| 5) rises in the morning | night |

F. Write (T) for true and (F) for the following sentences:

(5x1=5)

- 1) Clouds remain in the same place and do not move. _____
- 2) We read newspaper and books to get information. _____
- 3) Smoke from vehicles clean the air. _____
- 4) We can count the stars. _____
- 5) We can reduce traffic problems by using public transport like bus or metro train. _____

G. Answer the following question:

(3x2=6)

- 1) Name any five means of communication.

- 2) Define season.

- 3) What do you understand by communication.

H. Give one example of each :

(3x2=6)

- 1) communication by only reading _____
- 2) communication by only listening _____
- 3) communication by only seeing and listening _____

I. Draw a traffic light and write its symbols:

(3)

XAVIER SCHOOL, GAMHARIA

3rd Term Exam 2018-19

Class : I.....

Sub :-General Knowledge

F.M. – 60

Date :- 11-02-2019

Time :- 2 hrs

Name :-

Roll. No. :-

Read the question paper carefully and answer the following questions:

I. Match the following: (5)

Column A

1. Sania Mirza
2. Mary Kom
3. Tania Sachdev
4. Geeta Phogat
5. Sania Nehwal

Column B

- a. boxing
- b. tennis
- c. chess
- d. badminton
- e. wrestling

II. Name the following from the clues given below: (4)

Rainy season	Train	February	cycle
--------------	-------	----------	-------

- 1) Once in every four years this month has 29 days. _____
- 2) We carry umbrellas and wear gumboots during this season. _____
- 3) This vehicle needs human power to move. _____
- 4) This vehicle moves on railway tracks. _____

III. Name any five playing items you see in a park: (2x5=10)

- a. _____
- b. _____
- c. _____
- d. _____
- e. _____

IV. Write down the names of these sports gear from the clues given below: (2x5=10)

Hockey stick	Helmet	Skates	Gloves	Swimming goggles
--------------	--------	--------	--------	------------------





V. Name these following places using the clues given below:

(2x5=10)

Cinema	Post office	Hospital	Pharmacy	Bank
--------	-------------	----------	----------	------


1. You come here when you are sick. _____
2. You deposit and withdraw money from here. _____
3. Letters are delivered from here. _____
4. You buy medicines from here. _____
5. You watch movies here. _____

VI. Name these vehicles:

(2x5=10)










VII. Write down the names of these cartoon characters from the clues given below: (6)

Doraemon	Jerry	Boots	Ash	Dora	Tom
----------	-------	-------	-----	------	-----



VIII. Name the following musical instruments: (5)

1.



T		B		A
---	--	---	--	---

P		A		O
---	--	---	--	---



G		I		A	
---	--	---	--	---	--

S		T		R
---	--	---	--	---

XAVIER SCHOOL, GAMHARIA

3rd Term Exam 2018-19

Class : I.....

Sub :-Hindi Language

F.M. – 60

Date :- 13-02-2019

Time :- 2 hrs

Name :-

Roll. No. :-

1. सही विकल्प पर का निशान लगाओ : - (12)

क) 'आगे' का उल्टा शब्द है -

सामने

दूर

पीछे

ख) 'हँसना' का विलोम शब्द है -

रोना

चिल्लाना

मुस्कराना

ग) 'मीठा' का विलोम शब्द है -

तीखा

कड़वा

मीठा

घ) वे शब्द, जिनका अर्थ एक - दूसरे से उल्टा हो उन्हें क्या कहते हैं?

विलोम शब्द

समनार्थी शब्द

क्रिया शब्द

ड) आइस्क्रीम 'ठंडी' होती है तो चाय -

बड़ा

गरम

नीचे

च) 'दिन' में सूरज निकलता है तो तारे

शाम

रात

सुबह

2. चित्र देखकर खाली स्थान भरो : -

(5)

क) पेड़ के पीछे से निकल रहा है

ख) कुछ बच्चे खेल रहे हैं

ग) एक बच्चे के हाथ में है

घ) बच्चे में रंग भरकर एक-दूसरे पर फेंक रहे हैं

ड) सब बच्चे बहुत है

3. उलटे अर्थवाले शब्दों से खाली स्थान भरो : -

(4)

(जाता, जागते, बाहर, रोती)

क) चूहा अंदर है पर बिल्ली है

- ख) रात को सोते हैं और सुबहहै
ग) मीरा हँसती है पर वाणीहै
घ) बगीचे में कोई आता है तो कोईहै

4. सही मिलान करो : -

(10)

क) ४१	बयालीस
ख) ४२	इक्त्तालीस
ग) ४३	चौवालीस
घ) ४४	तैतालीस
ङ) ४५	छियालीस
च) ४६	पैंतालीस
छ) ४७	अड़तालीस
ज) ४८	सैंतालीस
झ) ४९	पचास
ञ) ५०	उनचास

5. चित्र देखो और उसके बारे में तीन वाक्य लिखो : -

(6)

- क)
-
- ख)
-
-
- ग)
-
-

6. 'तिरंगा झंडा' का चित्र बनाओ और उसके बारे में पाँच वाक्य लिखो

(10)

.....
.....
.....
.....
.....
.....
.....
.....
.....
.....
.....
.....
.....
.....
.....
.....
.....
.....
.....
.....
.....
.....
.....
.....

7. आपके कक्षा में विद्यार्थियों की संख्या कितनी है? अंकों एवं अक्षरों दोनों में लिखो :-

(3)

.....
.....
.....

8. नीचे लिखी क्रियाओं को विपरीत क्रिया शब्दों से मिलाओ: -

(10)

1. सोना
2. उठना
3. लेना
4. हँसना
5. आना

- बैठना
- रोना
- जागना
- जाना
- देना

XAVIER SCHOOL, GAMHARIA

3rd Term Exam 2018-19

Class : I.....

Sub :-Hindi Literature

F.M. – 60

Date :- 08-02-2019

Time :- 2 hrs

Name :-

Roll. No. :-

1. सही उत्तर चुनकर () लगाए :
(20)

क. धम्मक किसका नाम था ?

1. शेर 2. खरगोश 3. हाथी

ख. सभी जानवर किससे परेशान थे ?

1. भालू 2. शेर 3. हाथी

ग. शर्त कोन जीता ?

1. शेर 2. बदर 3. हाथी

घ. शेख चिल्ली को किसका अड़ मिला ?

1. मुरगी 2. चिड़िया

ड. शेख चिल्ली क्या बनना चाहता था ?

1. अभिनेता 2. व्यापारी

च. बस अपने साथ किसका नान लेकर आई ?

1. स्कूल 2. घर 3. शहर

छ. अपने बस को हमे केसा रखना चाहिए ?

1. गदा 2. साफ़ 3. खराब

ज. बस में केसे बैठना चाहिए ?

1. चुप होकर 2. शोर मचाकर 3. उछलकर

झ. ठुमक .. ठुमक कर नाच किसने दिखाया ?

1. गीदड़ 2. चिड़िया 3. हिरण

खुशियों का सदेश कोन लाया ?

1. मोर 2. हाथी 3. चिड़िया

2.) सही () या गलत () का चिन्ह लगाए :
(4)


क. शेख चिल्ली बचपन से ही बड़े बड़े सपने देखते थे 1 ()

ख. सपना देखते देखते शेख चिल्ली ज़ोर ज़ोर से रोने लगा 1 ()

ग. शेख चिल्ली के हाथ से अड़ गिरकर भी नहीं टूटा 1 ()

घ. शेख चिल्ली के सारे सपने चूर चूर हो गए 1 ()

3.) सही मिलान कीजिए :
(4)



4.) विलोम शब्दों के सही जोड़े लगाए :
(4)

खुश

छोटा

बड़ा

उदास

पास

खुला

बद

दूर

5.) इन शब्दों के वाक्य बनाए :
(4)

क. लबा -

.....

ख. बड़ी -

.....

6.) किसने , किससे कहा ?
(8)

क. ' मेरे पास शेर को मज़ा चखाने की एक तरकीब है' 1

.....
.....

.....
..... 1

ख. ' में आप की तरह नहीं दहड सकता ' 1

.....
.....

.....
..... 1

6.) लिंग बदलकर लिखो :

(6)

शेर

हाथी

बदर

माता

दादा

नानी

7.) नीचे दिए प्रश्नों के उत्तर दीजिए :

(6)

क. लिखने पकड़ने का काम हाथ की किस अँगली से होता है ?

उत्तर :

.....
.....

.....
.....

ख.) छोटी अँगली ने सभी को क्या समझाया ?

उत्तर

.....
.....

.....
.....

8.) एक से अनेक शब्द बनाए :
(4)

अड़
बच्चा
सपना
तारा

XAVIER SCHOOL, GAMHARIA

3rd Term Exam 2018-19

Class : I.....

Sub :-Moral Science

F.M. – 60

Date :- 14-02-2019

Time :- 2 hrs

Name :-

Roll. No. :-

I. Complete the following lines:-

(1x8= 8)

Oh Lord, again we _____ You for giving us

The beautiful gift of the _____

With all its _____, plants, _____,

Birds and _____, animals, _____

And so many other _____.

Help us to look after these _____ always.

II. Answer the following:-

(2x7=14)

1. How do you feel, when you see garbage all around?

Ans. _____.

2. Whom should we say thank you for this world ?

Ans. _____.

3. How we are using nature's gift?

Ans. _____

_____.

4. How do we spoil nature's gift ?

Ans. _____

5. If we will throw stone on a dog ,how it will feel ?

Ans. _____

6. In what ways are some people cruel to stray animals?

Ans. _____

_____.

7. How can you help the society to keep it clean?

Ans. _____

_____.

III. Fill in the blanks: -

(1x10=10)

(peels, trees, friends, animals, world, zoo, kind, wonderful, useful, live)

1. Plant _____.
2. Throw vegetables _____ in the dustbin.
3. We should not kill _____.
4. Animals are our _____.
5. We should be _____ to the animals.
6. Nature has given us _____ gifts.
7. Animals are very _____.
8. We will make the _____ a better place to _____.
9. Don't disturb the animals in _____.

IV. State True or False:-

(1x10=10)

1. Throw paper on the road. _____
2. Wash clothes in a river or lake. _____
3. Cut down the trees. _____
4. We should keep our society dirty. _____
5. We need to take care of our world. _____
6. This world is very beautiful. _____
7. Keep your surroundings clean. _____
8. Use dustbin to throw the waste. _____
9. Planting trees. _____
10. We should always use plastic bags. _____

V. Name any two:

(2x4=8)

1. Domestic animals - _____ , _____
2. Pet animals - _____ , _____
3. Wild animals - _____ , _____
4. Birds - _____ , _____

VI. Make a poster that says "Be kind to animals".

(4)

VII. Draw any two pet animals and name them.

(2.5x2=5)

--	--

(1 marks for neatness)

XAVIER SCHOOL, GAMHARIA

3rd Term Exam 2018-19

Class : I.....

Sub :-Mathematics

F.M. – 60

Date :- 04-02-2019

Time :- 2 hrs

Name :-

Roll. No. :-

Read the question paper carefully and answer the following questions:

Q.1. Complete the sentences:

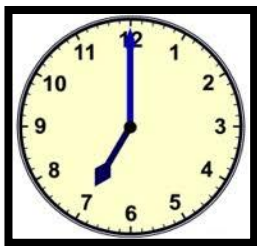
(10)

1. Division is always denoted by the _____ sign.
2. If a number is divided by itself the answer will be always _____.
3. There are _____ parts of division.
4. Division means repeated _____.
5. A clock tells us the _____.
6. The short hand is the _____ hand.
7. The action of measuring something is called _____.
8. Meter is a _____ unit of length.
9. A bag is _____ than a pencil.
10. _____ comes before Friday.


Q.2. What is the time?

(2)

1.



2.







Q.3. Tick (✓) the correct values and cross (x) the wrong values:

(4)

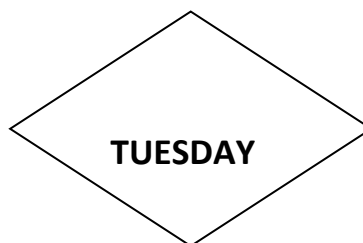
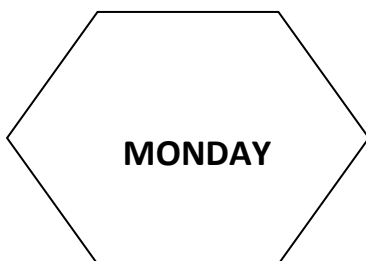
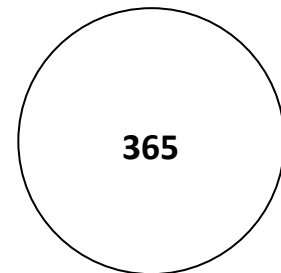

1. We must wake up late , every morning.
2. We should complete our homework everyday.
3. We must have our meals on time.
4. We must watch television till late at night.

Q.4. Write down the correct time of the day from the clues given below : (4)

Morning	Noon	Evening	Night
			
			

Q.5. Colour the correct shapes according to the instructions given below: (2x5=10)

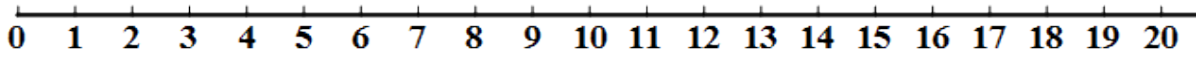
1. The day which is a holiday. (BLUE)
2. The second day of the week. (ORANGE)
3. The first month of the year. (GREEN)
4. The day that comes after Sunday. (RED)
5. Number of days in a year. (PINK)



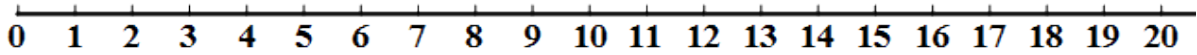
Q.6. Divide on number line:

(2x5=10)

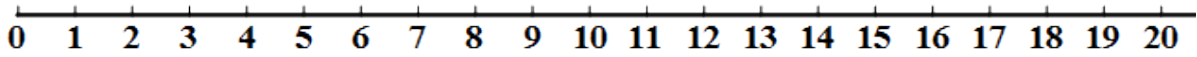
a. $14 \div 2 =$



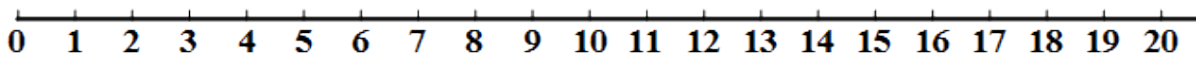
b. $16 \div 4 =$



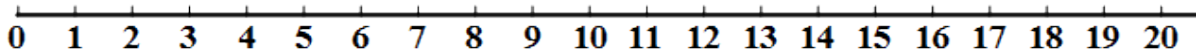
c. $10 \div 5 =$



d. $8 \div 2 =$


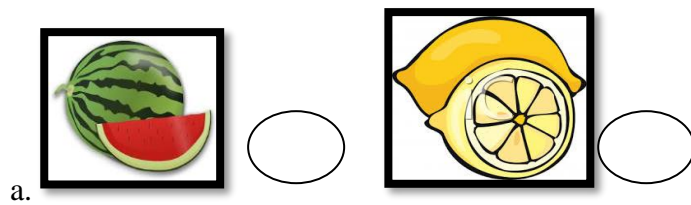


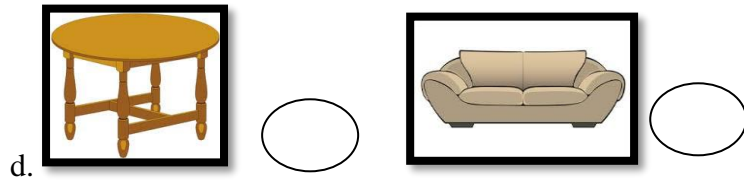
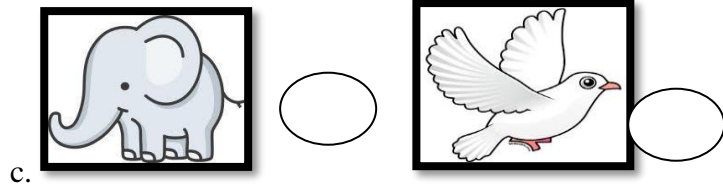
e. $12 \div 2 =$



Q.7. Write (L) for lighter objects and (H) for heavier objects:

(4)





Q.8. Given below is the calendar for the year 2019, go through the questions and answer correctly: (4)

FEBRUARY 2019						
Sun	Mon	Tue	Wed	Thu	Fri	Sat
					1	2
3	4	5	6	7	8	9
10	11	12	13	14	15	16
17	18	19	20	21	22	23
24	25	26	27	28		

- Which month is it? _____
- Which year is it? _____
- How many days are there in this month? _____
- How many Sundays are there in this month? _____

Q.9. The table given below shows the favourite vegetables of the students in the class:

(7)

Vegetables	No. of students											
	1	2	3	4	5	6	7	8	9	10	11	12
Potato	☺	☺	☺	☺	☺	☺						
Onion	☺	☺	☺	☺								
Carrot	☺	☺	☺	☺	☺	☺	☺					
Radish	☺	☺										
Tomato	☺	☺	☺									
Pumpkin	☺	☺	☺	☺	☺							

a. How many children like the following vegetables?

Carrot: _____ Onion : _____ Pumpkin: _____

b. Fill in the blanks:

1. The most favourite vegetable is _____.
2. The vegetable which is liked the least _____.
3. _____ children like tomato.
4. _____ children like potato.

Q.10. Do as directed:

(5)

A. Addition:

$$\begin{array}{r} 1. \quad T \quad O \\ \quad 4 \quad 2 \\ + \quad 6 \quad 4 \\ \hline \\ \hline \end{array}$$

$$\begin{array}{r} 2. \quad T \quad O \\ \quad 7 \quad 3 \\ + \quad 4 \quad 2 \\ \hline \\ \hline \end{array}$$

B. Subtraction:

$$\begin{array}{r} 1. \quad T \quad O \\ \quad 4 \quad 9 \\ - \quad 1 \quad 3 \\ \hline \\ \hline \end{array}$$

$$\begin{array}{r} 2. \quad T \quad O \\ \quad 6 \quad 6 \\ - \quad 3 \quad 3 \\ \hline \\ \hline \end{array}$$

C. Multiply:

$$\begin{array}{r} T \quad O \\ 4 \quad 9 \\ \times \quad 2 \\ \hline \\ \hline \end{array}$$