

XAVIER SCHOOL, GAMHARIA

2nd Term Exam 2018-19

Class : I.....

Sub :-Computer Applications

F.M. – 60

Date :- 10-10-2018

Time :- 2 hrs

Name :-

Roll. No. :-

I. Tick the correct options:

(1*8=8)

1. _____ opens an item.
 - i. single click
 - ii. double click
 - iii. scroll
2. Always take the _____ of our teacher before working on a computer.
 - i. help
 - ii. permission
 - iii. both of these
3. Do not touch the _____ of the computer.
 - i. monitor
 - ii. wires
 - iii. CPU
4. Always clean your computer with a _____ cloth.
 - i. wet
 - ii. dry
 - iii. silk
5. You should not _____ in a computer room.
 - i. read
 - ii. eat or drink
 - iii. sit straight
6. Press the keys of the _____ gently.
 - i. keyboard
 - ii. mouse
 - iii. monitor
7. You should move quietly in a _____ while entering in a computer room.
 - i. group
 - ii. queue
 - iii. circle
8. What do we call the small arrow moving on the monitor?
 - i. tail
 - ii. stick
 - iii. mouse pointer

II. Write T(True) or F(False):

(1*8=8)

1. Right clicking on the desktop displays a list of commands on a monitor.
2. A mouse has three or four buttons.
3. A mouse pointer always moves towards the right side of the screen.
4. You should always sit too close to the computer.
5. Make noise in the computer room.
6. You should push the computer table.
7. A mouse helps to select any item on the monitor.
8. A small arrow that we can see on a monitor is called a stick.

III. Answer in one word:

(1*8=8)

- 1) Where do we fix the tail of a mouse? _____
- 2) should we enter in a computer room? _____
- 3) Which finger must we place on the left mouse button? _____
- 4) How should the keys of a keyboard be used? _____
- 5) Should we eat in a computer room? _____
- 6) How should we sit in front of the computer? _____
- 7) Which type of cloth should be used to clean a computer? _____
- 8) Which mouse button should we use to display the list of commands? _____

IV. Fill in the blanks choosing the correct word from the box:

(1*8=8)

Scroll wheel	run	wire	Clean
monitor	clicking	covered	Small

1. _____ is placed between the left and right mouse buttons of a mouse.
2. A mouse has a _____ that is fixed to the CPU.
3. Always _____ your computer with a dry cloth.
4. Do not sit too close to the _____.
5. Do not _____ in a computer room.
6. Pressing the mouse button once is called _____.
7. Keep the computer system _____ when not in use.
8. A mouse is _____ in size.

V. Encircle the following Mouse parts and functions:

(1*8=8)

{ POINTER; FAST; SELECT; TAIL; SMALL; DRAW; PLAYGAME }

P	L	A	Y	G	A	M	E
O	B	C	J	Y	S	F	S
I	D	C	W	X	M	Z	E
N	K	L	D	R	A	W	L
T	A	I	L	I	L	O	E
E	G	C	H	T	L	S	C
R	R	K	P	F	A	S	T

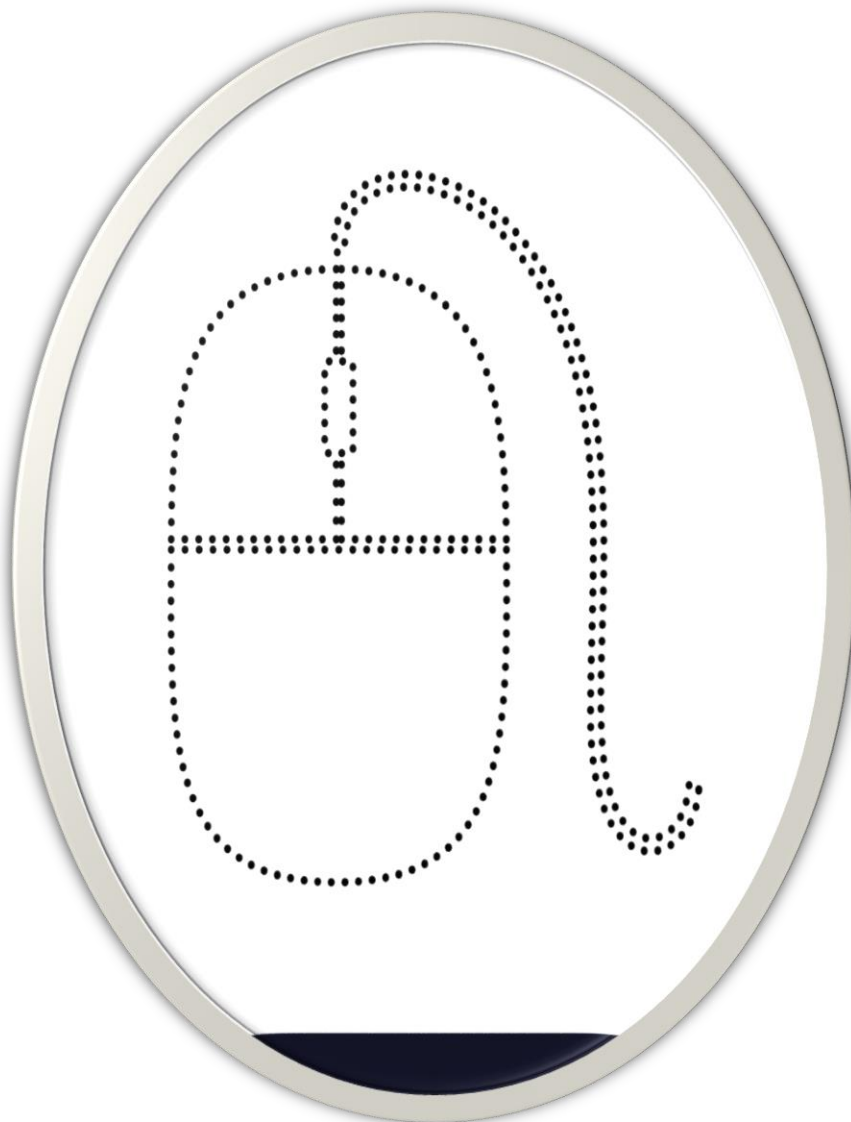
VI. WHO AM I?

(1*5=5)

1. I help you to type on a computer. _____
2. I am the Brain of the computer. _____
3. You can use me to take the printout on paper. _____
4. I show photos, games and movies on my screen. _____
5. You can use me to point at things shown on the monitor.

VII. Join the dots; label its parts and name it:

(1*7=7)



XAVIER SCHOOL, GAMHARIA

2nd Term Exam 2018-19

Class : I.....

Sub :-Drawing

F.M. – 25


Date :- 13-10-2018

Time :- 2 hrs

Name :-

Roll. No. :-

Ques 1 Colour the given picture



Ques 2. Draw and colour a big Sun.

XAVIER SCHOOL, GAMHARIA

2nd Term Exam 2018-19

Class : I.....

Sub :-English Language

F.M. – 60

Date :- 09-10-2018

Time :- 2 hrs

Name :-

Roll. No. :-

I. Fill in the blanks with her / it / his / she / I / he / you :

(1*7=7)

1. This is Mohit. _____ is a farmer.
2. He is Ramesh. This is _____ new car.
3. She is my aunt. This is _____ new bag.
4. She is Mala. _____ play with her everyday.
5. This is Mrs. Rao. _____ is my new teacher.
6. This cow is white. _____ has a long tail.
7. _____ are my best friend.

II. Look at the picture and fill in the blanks:

(1*5=5)

1. The elephant is _____ the tree.



2. The bird is flying _____ the sky.



3. The duck is _____ the ducklings.



4. The parrot is sitting _____ a branch.



5. There is a nest _____ the tree.



III. Match column A with column B:

(1*6=6)

A	B
1. I take a nap	a. under the rug.
2. Leave the keys	b. in my pocket.
3. I grow tomatoes	c. on the table.
4. The river flows	d. on the cot.
5. There is a spider	e. in a pot.
6. My hand is	f. under the bridge.

IV. Underline the Pronouns:

(1*7=7)


1. I play with you on Sunday.
2. Cow gives us milk. It is white in colour.
3. Meera has a doll. She likes to play with it.
4. Rohan likes to eat chocolates. His father buys them for him everyday.
5. My mother has gone to the market. She went to buy vegetables.
6. I am sitting with my friends.
7. The lamp is on the table. It gives us light.

V. Circle the Prepositions:

(1*10=10)

1. The children are in the class.
2. The cat jumped out of the box.
3. The tortoise carries its shell on its back.
4. The boat is under the bridge.
5. The porter is walking behind Mr. Singh.
6. The basket is in front of the tree.
7. Jack climbed up the hill.
8. The old man fell down the stairs.
9. The horse is standing near the man.
10. The butterfly is in between the flowers.

VI. Read the following comprehension carefully and answer the following questions:



David and his family visited the zoo last Sunday. David was very excited. His father took pictures of different animals and birds present in the zoo. David was happy to see a peacock dancing. The animals which scared David were the lion, tiger, hippopotamus and crocodile. David’s mother gave the monkeys some bananas. That day David enjoyed himself and decided to visit the zoo again.

A. State whether the following statements are True or false: (1*5=5)

- i. David’s family visited the zoo on Monday. _____
- ii. David’s father did not go to the zoo. _____
- iii. David was happy to see a peacock dancing. _____
- iv. David wanted to play with the tiger. _____
- v. David’s mother gave some bananas to the monkeys. _____

B. Name six animals that can be seen in a zoo: (1*6=6)

- i. _____
- ii. _____
- iii. _____
- iv. _____
- v. _____
- vi. _____

C. Have you ever visited the zoo: (Yes / No) (1*1=1)

VII. Topic Writing: Write 7 sentences about 'My School' :

(1*7=7)

VIII. Look at the picture and answer the following questions:

(1*5=5)



1) Where is the monkey?

.....

2) Where is the cat?

.....

3) Where is the boy sitting?

.....

4) What is the old man doing?

.....

5) What are the boys playing with?

.....

XAVIER SCHOOL, GAMHARIA

2nd Term Exam 2018-19

Class : I.....

Sub :-English Literature

F.M. – 60

Date :- 04-10-2018

Time :- 2 hrs

Name :-

Roll. No. :-

Q1) Complete the poem. (8)

In the _____
Tulips _____
_____ and golden
In a _____
Each one _____ its
_____ cup
_____ rain and
_____ up

Q2) Write opposites of the following words . (10)

- | | |
|-------------------|-------------------|
| a) friend x _____ | f) opened x _____ |
| b) here x _____ | g) happy x _____ |
| c) near x _____ | h) little x _____ |
| d) under x _____ | i) top x _____ |
| e) day x _____ | j) always x _____ |

Q3) Write rhyming words for the following words. (10)

- | | |
|------------------|-----------------|
| a) tail - _____ | f) box - _____ |
| b) red - _____ | g) help - _____ |
| c) far - _____ | h) toy - _____ |
| d) honey - _____ | i) up - _____ |
| e) find - _____ | j) row - _____ |

Q4) Make sentences with the given words. (6)

- a) Garden –
-
- b) box –
-
- c) friend –
-

- d) kite –
-
- e) string –
-
- f) pretty –
-

Q5) Write word meanings of the following words . (4)

- a) everywhere – _____
- b) naughty – _____
- c) flat – _____
- d) happy - _____

Q6) Write True (T) or False (F) for the following sentences. (5)

- a) The kite is naughty. ()
- b) The kite is made up of clothes. ()
- c) The children bring ropes to climb. ()
- d) Tod was a cow. ()
- e) Tod shared the honey with Wabbit. ()

Q7) Fill in the blanks. (5)

- a) _____ was the friend of Tod.
- b) Tod was a _____ .
- c) Wabbit loved to help his _____ .
- d) _____ thanked his friend Wabbit .
- e) Tod and Wabbit found the _____ in the box of toys

.Q8) Who said these lines to whom? (4)

- a) "let's open the door, Wabbit."
.....
- b) "Wabbit, will you please help me find my honey pot."
.....
- c) "Yes, I will ."
.....
- d) "Look"
.....

Q9) Answer the following question.

(8)

a) How does the kite look ?

.....
.....

b) What do the tulips need for them to grow?

.....
.....

c) What did Tod look for?

.....
.....

d) What did Wabbit find near the box of toys?

.....
.....

XAVIER SCHOOL, GAMHARIA

2nd Term Exam 2018-19

Class : I.....

Sub :-EVS

F.M. – 60

Date :- 05-10-2018

Time :- 2 hrs

Name :-

Roll. No. :-

A. Fill in the blanks by choosing correct word from the given box:

(10 x 1=10)

exercise	neighbourhood	cobbler	eight
teacher	flush	bank	zebra crossing
railway station	helmet		

- 1) A _____ teaches in a school.
- 2) A _____ mends shoes.
- 3) We keep our money safe in a _____ .
- 4) We take trains from _____.
- 5) We should sleep for _____ hours every night.
- 6) Playing is a form of _____.
- 7) We should cross the road at _____.
- 8) Always wear a _____ when you go on a two –wheeler.
- 9) We should _____ the toilet after using it.
- 10) Houses and places near our house together are called our _____ .

B. Write true or false for the given statements:

(5x1=5)

- 1) A farmer brings milk to our house. _____
- 2) A porter helps to carry our things. _____
- 3) We call a fire station ,when someone steals something. _____
- 4) We buy postcards from a post office. _____
- 5) It is safe to jump on the chairs and desks of school. _____

C. Match the following

(5x1=5)

- | | |
|---------------------|------------------|
| 1) long nails | use handkerchief |
| 2) cough and sneeze | trim them |
| 3) never talk | use a dustbin |
| 4) policeman | with strangers |
| 5) garbage | catch thieves |

D. Unscramble these words:

(10x1=10)

- 1) A I O T L R-_____
- 2) O H P S I T A L -_____
- 3) S E C H S-_____
- 4) O A S P-_____
- 5) B M C O- _____
- 6) T O T O H R B U H S- _____
- 7) O W E T L - _____
- 8) R E B A B R-_____
- 9) L O C S H O-_____
- 10) S T A M O P N -_____

E. Answer in one word:

(5x2=10)

- 1) The games we play outside ._____
- 2) We must wear this in car._____
- 3) This keeps our body and mind fit._____
- 4) We cut our nails with this ._____
- 5) The helper who grow food crop for us._____

F. Circle the odd one out: (5x1=5)

- | | | |
|------------------|-----------|----------------|
| 1) chess | ludo | cricket |
| 2) toothbrush | pencil | comb |
| 3) stranger | milkman | postman |
| 4) bank | classroom | hospital |
| 5) traffic light | chairs | zebra crossing |

G. Make a happy face 😊 for good touch and 😞 angry face for bad touch:(5x1=5)

- 1) Teacher shaking hands with you._____
- 2) Stranger pulling your cheeks._____
- 3) Grandma kissing you._____
- 4) Papa hugging you._____
- 5) Bus conductor making you sit on his lap._____

H. Answer the following questions:

(4x2=8)

1) Name any four places in your neighbourhood.

2) Which two helpers help to keep our neighbourhood clean?

3) Write any two safety rules to be followed at school.

4) Write any two ways to keep our surroundings clean.

I. Draw and name any two objects which we use to keep our body clean.

(2x1=2)

XAVIER SCHOOL, GAMHARIA

2nd Term Exam 2018-19

Class : I.....

Sub :-General Knowledge

F.M. – 60

Date :- 11-10-2018

Time :- 2 hrs


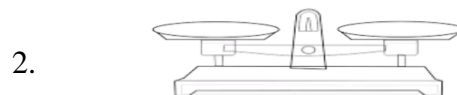
Name :-

Roll. No. :-

**I. Read the clues carefully and name the sense organs being used, on the given blanks:-
(2x5=10)**

- 1) I taste with my - _____
- 2) I smell with my - _____
- 3) I hear with my - _____
- 4) I feel with my - _____
- 5) I see with my - _____

**II. Colour the box red for the picture that needs electricity to run and blue for the rest:-
(1x5=5)**



**III. Read the given lines and name the things we see in the sky:-
(2x5=10)**

- 1) A bow with seven colours that you see after a shower of rain.

- 2) A hot ball of fire that shines in the day and gives us heat and light.

- 3) Puffy and fluffy, white and grey in colour which brings rain.

- 4) I twinkle in the night and make the sky bright.

- 5) I look white and change my shape every night.

IV. Write the language spoken beside the names of the country given below. Take help from the bracket:- (1x6=6)

[French | Turkish | Chinese | Arabic | Italian | English]

- | | | | | | |
|------------|---|-------|----------|---|-------|
| 1. Turkey | - | _____ | 2. Italy | - | _____ |
| 3. England | - | _____ | 4. China | - | _____ |
| 5. France | - | _____ | 6. Egypt | - | _____ |

V. Write 4 important uses of water in our life: - (2x4=8)

1.
2.
3.
4.

VI. Match the name of countries with their currency or national animals:- (1x6=6)

Countries.	Currency or animals
1. India.	a. brown bear
2. Australia.	b. Pound (£)
3. Canada.	c. Rupee (₹)
4. UK.	d. red kangaroo
5. Finland.	e. Dollor (\$)
6. USA.	f. beaver

VII. The picture given below are of some famous leaders. Write their names with the help of clues given:- (2x4=8)

1. N_L__M__D__A



2. M__H__T__E__



3. M _ H _ T _ G _ ND _ _ _




4. A _ _ R _ _ A _ L _ N _ O _ _



VIII. Colour the picture of the rainbow and clouds given below:-

(4marks)



2 marks for neatness.

XAVIER SCHOOL, GAMHARIA

2nd Term Exam 2018-19

Class : I.....

Sub :-Hindi Language

F.M. – 50

Date :- 08-10-2018

Time :- 2 hrs

Name :-

Roll. No. :-

1. नाम की जगह लिखे शब्दों पर लगाओ :-

(4)

क) चिड़िया चहचाह रही है वे खुश हैं

ख) वे डाल पर फुदक रही है

ग) उन्हें बहुत सारे दाने मिल गए हैं

घ) उन्होंने भरपेट दाना खाया है

2. उचित सर्वनाम शब्द ढूंढकर भरो :-

(5)

(आप, मेरे, वह, तुम, मेरा, उसके)

क) पापाकब आएँगे?

ख)मेरे अच्छे दोस्त हो

ग)पाठशाला जा रहा है

घ)नाम अजय है

ड)पास एक पतंग है

3. सही सर्वनाम शब्द चुनकर वाक्य पूरे करो :-

(4)

क)बिल्ली का नाम पुसी है (मेरी / हम)

ख)दूध पीती है (वे / वह)

ग)रंग सफ़ेद है (उसका / उसके)

घ) अपनी बिल्ली से बहुत प्यार है (मुझे

/ मैं)

4. वस्तुओं को उनकी विशेषताओं से मिलाओ :-
(4)

लाल

कड़वा

गोल

दो

5. नीचे दिए गए चित्रों के लिए दो-दो विशेषण चुनकर लिखो :-
(4)

1.

..... ,
.....

दो, पांच
सफ़ेद, काली

2.

.....
.....

ठंडी, गरम
मीठी, फीकी

6. विशेषण शब्दों को रेखांकित करके दुबारा लिखो :-
(4)

क) बगीचे में रंग - बिरंगे फूल खिले हैं

.....

ख) आसमान में दो पतंगे उड़ रही हैं

.....

ग) बन्दर बहुत चालाक है

.....

घ) माँ ने लाल साड़ी पहनी

.....

7. दिए गए चित्रों के लिए एक एक विशेषण लिखो :-

(6)

1.

2.

.....

.....

3.

4.

.....

.....

5.

6.

.....

.....

8. आम पर पाँच पंक्तियाँ लिखो :-

(10)

1.....

.....

.....

.....

.....

.....

.....

.....

.....

.....

.....

.....

.....
.....
.....
.....
.....
.....
.....
.....
.....
.....
.....

9. इन गिनती को हिंदी के अक्षरों में लिखो :-
(5)

२१ -
२९-
२५ -
३०-
२७-

10. प्रश्नों के उत्तर लिखो :-
(4)

क) सर्वनाम किसे कहते हैं ? उदाहरण लिखो
उत्तर.....
.....
.....
.....
.....
.....

ख) विशेषण किसे कहते हैं ? उदाहरण लिखो
उत्तर.....
.....
.....

.....
.....
.....
.....

11. एक अनेक छांटकर सही जगह पर लिखो :-

(8)

(तारे , बच्चा , मालाएँ , सड़कें , बकरी , आँख , कक्षा , तितलियाँ)

एक

अनेक

- | | |
|---------|----|
| 1. | 1. |
| | |
| 2. | 2. |
| | |
| 3. | 3. |
| | |
| 4. | 4. |
| | |

12. लिंग बदलो :-

(2)

चिड़ा -

छात्र -

XAVIER SCHOOL, GAMHARIA

2nd Term Exam 2018-19

Class : I.....

Sub :-Hindi Literature

F.M. – 60

Date :- 06-10-2018

Time :- 2 hrs

Name :-

Roll. No. :-

1. इन वर्णों पर अनुस्वर () लगाए -

(5)

अक , दग , मदिर , पख , सग

2. एक शब्द में उतर लिखें -

(4)

क . नदी किनारे क्या थ1 ?

उत्तर- नदी किनारे एक ----- था 1

ख . पेड़ पर कौन चढ़ गया ?

उत्तर- पेड़ पर एक कला ----- चढ़ गया 1

ग . सिपाहीयों ने साँप को किस में बंद क्र दिया ?

उत्तर- सिपाहियों ने साप को -----में बंद क्र दिया 1

घ) सिपाही साप के बिल से क्या निकालने लगे ?

उत्तर- सिपाही साप के बिल से -----निकालने लगे 1

3. दो - दो शब्द बनाएं -

(10)

क) क्क

.....

ख) च्च

.....

ग) ल्ल

.....

घ) प्प

.....

ङ) ञ्ज

.....

8. चित्र देखकर नाम लिखा -
(10)

- 1.
- 2.
- 3.
- 4.
- 5.

9. चित्रों को उनके नाम के साथ रेखा खींचकर मिलाए -
(6)

ढोलक
मेंना
चाँद
भेड़
नौका
हंस

XAVIER SCHOOL, GAMHARIA

2nd Term Exam 2018-19

Class : I.....

Sub :-Moral Science

F.M. – 60

Date :- 12-10-2018

Time :- 2 hrs

Name :-

Roll. No. :-

➤ **1 marks for neatness**

I. Fill in the blanks:

(1x10=10)

_____ you _____ for the _____

That _____ down my _____ pane

It _____ the _____ look fresh and _____.

And _____ our world _____ and clean.

II. Answer the following :-

(2x6= 12)

1. What do you feel when bad things happen because of rain?

Ans _____

2. Write about a bad thing that happens when it rains.

Ans. _____

3. Who would feel most unhappy if it rains too much?

Ans. _____

4. Write the names of 4 different things which you see in the garden.

Ans. _____

5. Who has created our world?

Ans. _____

6. How is this world?

Ans. _____

III. Match the following :-

(1x7= 7)

1. The Sun
2. The Stars
3. The Streams
4. Seasons
5. Butterfly
6. Rainbow
7. Heavy rain

- a. rainy season
- b. flowers
- c. different colours
- d. sparkling blue
- e. twinkle
- f. golden rays
- g. floods

IV. Write 'T' for True and 'F' for False:-

(1x10=10)

1. We live in a beautiful world. _____
2. The stars twinkle at night. _____
3. The river has blue water. _____
4. Rainfall falls from clouds. _____
5. Clouds float in the sky. _____
6. The sun gives us darkness. _____
7. This world is ugly. _____
8. We cannot see rainbow during rainy season. _____
9. Rain is bad for everyone. _____
10. We use raincoat during rainy season. _____

V. Choose the things that are made by God and write them below:-



(1x8=8)

Moon, chair, trees, chalk, books, sun, table, animals, pencil, rivers, box, flowers
butterfly, birds

- | | | |
|----------|----------|----------|
| 1. _____ | 2. _____ | 3. _____ |
| 4. _____ | 5. _____ | 6. _____ |
| 7. _____ | 8. _____ | |

VI. Draw any two things that are created by God.

(6x2=12)



XAVIER SCHOOL, GAMHARIA

2nd Term Exam 2018-19

Class : I

Sub :-Mathematics

F.M. – 60

Date :- 03-10-2018

Time :- 2 hrs

Name :-

Roll. No. :-

Read the question paper carefully and answer the following questions:

Q.I. Fill in the blanks: (8)

1. Multiplication means repeated _____.
2. The answer we get by multiplying two numbers is called _____.
3. Any number multiplied by 0 gives the product _____ .
4. _____ has 3 sides and 3 corners.
5. A _____ has all the sides equal.
6. Egg is an example of the shape _____.
7. A circle has _____ sides and no corners.
8. A _____ has opposite sides equal.

Q.II. Subtract the following: (6)

1. T O	2. T O	3. T O
4 4	3 6	9 6
_ 2 2	- 2 4	- 4 2
_____	_____	_____
_____	_____	_____

4. T O	5. T O	6. T O
8 5	9 0	7 2
_ 2 4	_ 2 0	_ 4 2
_____	_____	_____
_____	_____	_____

Q.III. Find the difference:

(6)

1. $5 - 3 =$  $=$ _____

2. $9 - 7 =$  $=$ _____

3. $4 - 3 =$  $=$ _____

4. $7 - 3 =$  $=$ _____

5. $4 - 2 =$  $=$ _____

6. $6 - 5 =$  $=$ _____

Q.IV. Write as multiplication form:

(5)

1) $3+3+3 =$ _____ $=$ _____

2) $4+4 =$ _____ $=$ _____

3) $2+2+2+2+2 =$ _____ $=$ _____

4) $1+1+1+1 =$ _____ $=$ _____

5) $5+5 =$ _____ $=$ _____

Q.V. Write as addition form:

(5)

1. $3 \times 7 =$ _____ $=$ _____

2. $4 \times 2 =$ _____ $=$ _____

3. $4 \times 6 =$ _____ $=$ _____

4. $3 \times 4 =$ _____ $=$ _____

5. $5 \times 5 =$ _____ $=$ _____

Q.VI. Multiply the following:

(5)

1. T O 2. T O 3. T O 4. T O 5. T O

4 2 1 1 4 0 3 3 2 2

X 2 X 2 X 3 X 3 X 2

_____ _____ _____ _____ _____
_____ _____ _____ _____ _____

Q. VII. Draw and colour the following shapes according to the instruction given:

(5)

1. Rectangle (BLUE)



2. Circle (YELLOW)




3. Triangle (GREEN)



4. Square (PINK)



5. Cone (RED)



Q.VIII. Give 2 examples of each:

(2x5=10)

1. Circle: _____ , _____

2. Triangle: _____ , _____

3. Rectangle: _____ , _____

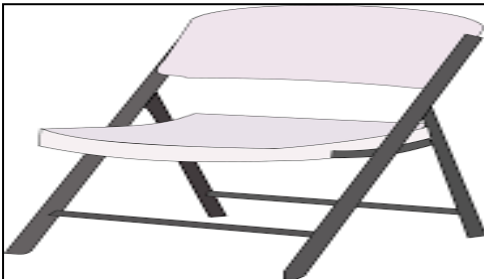
4. Square: _____ , _____

5. Cone: _____ , _____

Q.IX. Word problem:

(2x5=10)

1. A chair has 4 legs. How many legs will 8 chairs have?



Statement	Solution
No.of legs in a chair	
No. of chairs	x
Total no.of legs	
Ans: 8 chairs will have _____ legs	

2. A car has 4 wheels. How many wheels will 5 cars have?



Statement	Solution
No.of wheels in a car	
No.of cars	x
Total no.of wheels	
Ans: 5 cars will have _____ wheels	