

XAVIER SCHOOL, GAMHARIA

1st Term Exam 2018-19

Class : I.....

Sub :-Mathematics

F.M. – 60

Name :-

Roll. No. :-

I. Fill in the blanks:-

(1x7=7)

- a. The symbol of money is _____.
- b. $27 + 0 =$ _____.
- c. The symbol of addition is _____.
- d. Expanded form of 38 is _____ + _____.
- e. The greatest one digit number is _____.
- f. $13 + 3 =$ _____.
- g. The smallest two digit number is _____.

II. Add the following :-

(1x 6=6)

- | | | |
|--------------|--------------|--------------|
| a) T O | b) T O | c) T O |
| 6 0 | 3 3 | 8 9 |
| + <u>2 8</u> | + <u>2 6</u> | + <u>1 0</u> |
| | | |
| d) T O | e) T O | f) T O |
| 4 1 | 7 2 | 5 0 |
| + <u>2 6</u> | + <u>2 7</u> | + <u>2 0</u> |

III. Write the place value of the underlined numbers:-

(¹/₂ x 4=2)

- 1) 21 - _____
- 2) 58 - _____
- 3) 76 - _____
- 4) 93 - _____

IV. Tick the notes which would add up to the given number :-

(5x1=5)

1. 50 - 10 + 20 + 20 + 5
2. 70 - 10 + 20 + 50 + 5
3. 65 - 50 + 20 + 10 + 5
4. 31 - 20 + 10 + 50 + 1
5. 57 - 50 + 5 + 20 + 2

V. Addition (with carryover) :-

(6x2=12)

a.
$$\begin{array}{r} \text{T} \quad \text{O} \\ 7 \quad 4 \\ +2 \quad 9 \\ \hline \end{array}$$

b.
$$\begin{array}{r} \text{T} \quad \text{O} \\ 3 \quad 7 \\ +4 \quad 4 \\ \hline \end{array}$$

c.
$$\begin{array}{r} \text{T} \quad \text{O} \\ 8 \quad 4 \\ +1 \quad 6 \\ \hline \end{array}$$

d.
$$\begin{array}{r} \text{T} \quad \text{O} \\ 6 \quad 2 \\ +2 \quad 9 \\ \hline \end{array}$$

e.
$$\begin{array}{r} \text{T} \quad \text{O} \\ 5 \quad 5 \\ +3 \quad 5 \\ \hline \end{array}$$

f.
$$\begin{array}{r} \text{T} \quad \text{O} \\ 4 \quad 5 \\ +1 \quad 7 \\ \hline \end{array}$$

VI. Write the number names:-

(4x1=4)

- i. 27 - _____
- ii. 45 - _____
- iii. 19 - _____
- iv. 99 - _____


VII. Find the total value of:-

(2x1=2)

- i. 20 + 10 + 15 = _____
- ii. 35 + 20 + 10 = _____

VIII. Complete the pattern :-

(4x1=4)

1. 

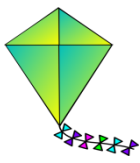
2. 10 20 30 40 _____

3. AB AC AD AE _____

4. 2 4 6 8 _____

IX. Shopping:-

(5x2=10)



15



7



35



15



3

Find the value of :-

1. A kite and a bat _____

2. A balloon and a kite _____

3. A toffee and an ice cream _____

4. A bat and a toffee _____

5. A kite and an ice cream _____

X. Problem Sums:-

(4x2=8)

1. A gift box has 23 chocolates and 18 lollipops. How many things are there in the box?

Sol. _____

2. Raj had 63 stamps and Mona had 48 stamps. How many stamps they have altogether?

Sol. _____

XAVIER SCHOOL, GAMHARIA

1st Term Exam 2018-19

Class : I...

Sub :-EVS

F.M. – 60

Name :- _____ Roll No: _____

A. Unscramble the letters and make correct words: (6)

- 1) CHLUN - _____
- 2) INRA - _____
- 3) DIWLIA - _____
- 4) HEALYHT - _____
- 5) ANKEL - _____
- 6) DINERN - _____

B. Match the following: (8)

A	B
1. River	a) Animal planet
2. Pizza	b) Christmas
3. Nose	c) grandmother
4. 25 December	d) Source of water
5. Milk	e) Unhealthy food
6. Father's mother	f) Goddess Lakshmi
7. Water tank	g) smell
8. Diwali	h) container

C. Fill in the blanks: (8)

- 1) We can eat all _____ raw. (fruits/pulses)
- 2) Games played outside are called _____ games. (indoor/outdoor)
- 3) I use my skin to _____ my soft toy. (feel/see)
- 4) We should _____ our food well. (swallow/chew)
- 5) Neighbours _____ each other in times of need. (help/ignore)
- 6) Water has no _____. (colour/home)
- 7) _____ is a natural source of water.(rain/rice)
- 8) We should drink atleast _____ glasses of water daily. (1 to 2 / 6 to 8)

D. Write (T) True or (F) False:

(6)

- 1) We share books and toys with friends.
- 2) Water is used for putting out friends.
- 3) We should not waste food.
- 4) Cauliflower is a cooked food.
- 5) We decorate Christmas tree on Diwali.
- 6) Plants and animals do not need water.

E. Answer the following questions:

(12)

- 1) Write the name of the festival
 - i. Festival of lights _____
 - ii. Festival of colours _____
- 2) Write any two healthy eating habits.

- 3) Write any two ways to save water.

- 4) Write any two uses of water.

- 5) What is served in a common kitchen in a Gurudwara?

- 6) Name any one indoor game and one outdoor game.


F. Draw a source of water and a container to store water. (10)

Source of water	Container

G. Match the following body parts correctly: (10)

Ourselves Name.....

Draw a line from each label to the right part of the body.



Hair

Nose

Ear

Eye

Neck

Chest

Wrist

Hand

Knee

Foot

Head

Eyebrow

Mouth

Chin

Shoulder

Elbow

Arm

Tummy

Leg

Ankle

XAVIER SCHOOL, GAMHARIA

1st Term Exam 2018-19

Class : I...

Sub :-Computer Applications

F.M. – 60

Name :- _____ Roll No: _____

A. Fill in the blanks:-

(1x7=7)

[CPU | monitor | scanner | keyboard | music | draw | printout]

- a) You can _____ pictures on a computer.
- b) _____ is the brain of a computer.
- c) You can listen _____ on a computer.
- d) A _____ looks like a television.
- e) A _____ is a machine that reads text or pictures printed on a paper.
- f) We can type alphabets or numbers using the _____.
- g) A printer is used to take a _____ on a paper.

B. Write true or false for the given sentences:-

(1x7=7)

- a) A keyboard is used to type letters, numbers, and words. _____
- b) You can watch movies on the CPU. _____
- c) A computer cannot solve sums. _____
- d) You can use computer to study different subjects. _____
- e) Speakers come in pairs. _____
- f) A monitor shows the work that we do on a computer. _____
- g) The laptop computer is big in size. _____

C. Rearrange the jumbled letters to get the name of a computer parts:-

(2x4=8)

- 1. DRAOBKEY - _____
- 2. MSEOU - _____
- 3. ROTIONM - _____
- 4. SPKEAERS - _____

D. Circle the right answer:-

(1x7=7)

- 1) A computer is used to make _____ in shops and malls.
 - a) music
 - b) letters
 - c) bills
- 2) Which of the following machines runs on fuel?
 - a) mixer
 - b) aeroplane
 - c) UPS
- 3) A monitor looks like a _____
 - a) television
 - b) CPU
 - c) mouse
- 4) A _____ is present inside the CPU box.
 - a) CPU
 - b) monitor
 - c) speakers
- 5) Which type of a machine is a computer?
 - a) electronic
 - b) man-made
 - c) both a and b
- 6) Which of the following works cannot be done on a computer?
 - a) play games
 - b) cook food
 - c) draw pictures
- 7) A _____ is used to point at things on the monitor.
 - a) CPU
 - b) mouse
 - c) printer

E. Name the following machines:-

(2x4=8)

1.

2.

3.

4.

F. Answer in one word:- (2x4=8)

- a) Name a machine that runs on human power? _____
- b) Which part of a computer helps us to draw pictures? _____
- c) Name a game that you have played on a computer? _____
- d) Name the device that is worn over the ears to listen to music? _____

G. Answer the following questions in one or two lines:- (2.5x2=5)

- 1. How many buttons are there on a computer mouse?
.....
.....
- 2. What can we do on a computer?
.....
.....

H. Draw the following pictures:- (5x2=10)

1. Monitor.

2. Mouse

XAVIER SCHOOL, GAMHARIA

1st Term Exam 2018-19

Class : I.....


Sub :-Drawing

F.M. – 25


Name :-

Roll. No. :-

Ques.1 Colour the given picture



Ques. 2 Colour the given picture



XAVIER SCHOOL, GAMHARIA

1st Term Exam 2018-19

Class : I

Sub :-English Language

F.M. – 60

Name :- Roll. No

A. Use ‘a’ or ‘an’ before these naming words: (10x1=10)

- | | |
|-------------------|------------------|
| 1. _____ nut | 6. _____ gift |
| 2. _____ orange | 7. _____ owl |
| 3. _____ bell | 8. _____ cow |
| 4. _____ flower | 9. _____ arrow |
| 5. _____ umbrella | 10. _____ temple |

B. Match the words with the correct articles: (8x1=8)

- | | | |
|-----------|---|--------|
| Ice-cream |  | engine |
| chicken |  | tree |
| Ganga |  | bus |
| arrow | | sky |

C. Put a tick () for the correct ones and a cross () for the wrong ones: (4x¹/₂=2)

- | | |
|---|--|
| 1. an elephant <input type="checkbox"/> | 2. an peacock <input type="checkbox"/> |
| 3. a egg <input type="checkbox"/> | 4. a queen <input type="checkbox"/> |

D. Complete the following sentences by using the correct capital letter given in the box below:- (5x1=5)

M I A T I

- | | |
|-------------------------------------|--------------------------------------|
| 1. _____ am your best friend. | 4. _____ n apple is a healthy fruit. |
| 2. _____ he school bell is ringing. | 5. _____ ndia is our country. |
| 3. _____ y uncle lives in London. | |

E. Rewrite these words in the correct order to make complete sense:

(5x2=10)

1 .is red /the /in colour/ball

2. dog/the/a cat /chased

3.mango/yellow/a /is /fruit/a

4. elders/your/respect/always

5. class/picnic/a/is fun

F. Rewrite the following sentences using capital letters, commas and full stops: (3x2=6)

1. i have red blue and green balls

2.mohit has a teddy bear a basket ball and a football

3.there are apples mangoes and bananas in the basket

G. Read these group of words .Tick the ones that are sentences and cross the ones that are not:

(4x1=4)

1.A bird can fly .

2.A duck

3.I go to school by bus.

4.Sun brightly

H. Write any five sentences on topic 'MY MOTHER':

(5x1=5)

I. Read the given story 'Mouse in the House' and answer the following questions:

• **Write the opposites:** (2)

1. no x _____

2. her x _____

• **Tick the correct option and write in the given blanks :** (2)

1. Ariel is a (cat / girl)_____.

2. Ariel's mouse does not have any _____ (whiskers / tail).

- Answer the following question :

(2x2=4)

1. Who is Sherlock ?

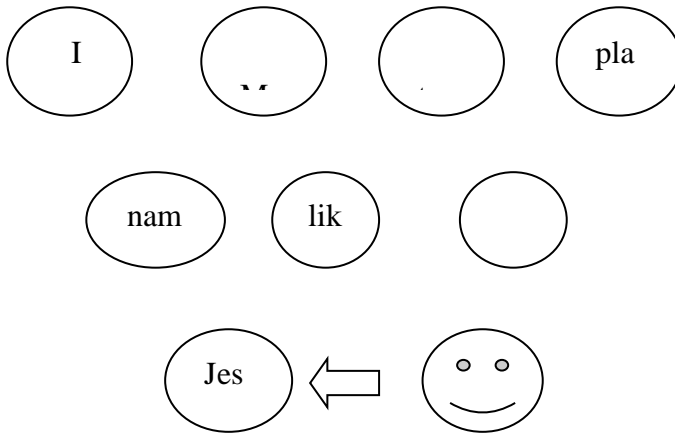
.....

2. Wher is Ariel's desk?

.....

J. Make any two sentences from the given bubbles and write them in the given below:

(2x1=2)



.....

.....

XAVIER SCHOOL, GAMHARIA

1st Term Exam 2018-19

Class : I.....

Sub :-English Literature

F.M. – 60

Name :-

Roll. No. :-

A. Complete the lines of the poem "Slow Fast Song".

(2x4=8)

Roll, roll, roll your _____

as _____ as you can.

_____, roll, roll your hands

as _____ as you can.

B. Match the words with its meaning: -

(2x4=8)

1. sure

alert

2. careful

buying goods

3. walk

certain

4. shopping

march

C. Write opposites for the given words: -

(1x8=8)

1. ripe x _____

2. old x _____

3. pick x _____

4. careful x _____

5. look x _____

6. fresh x _____

7. asleep x _____

8. strong x _____

D. Write rhyming word for the given words: -

(1x8=8)

1. seed - _____

2. thorn - _____

3. old - _____

4. shop - _____

5. pick - _____

6. look - _____

7. there - _____

8. fresh - _____

E. Fill in the blanks:-

(2x4=8)

[ripe | fresh | thorns | cloth]

1. The pineapple has _____.
2. Mother gives the fruit seller a _____ bag.
3. The grapes are _____.
4. The watermelons look _____.

F. Write true or false for the given sentences:-

(2x2=4)

1. The bus goes to Kamalpur. _____
2. Kapil and Abu see an old bridge. _____

G. Write slow or fast for the things and animals according to their movement:- (1x4=4)

1. aeroplane - _____
2. tortoise - _____
3. snail - _____
4. train - _____

H. Make sentence with the given words:-

(2x2=4)

1. shop - _____
2. bridge - _____

I. Answer the following questions: -

(2x4=8)

1. Which fruit was ripe?

Ans :- _____

2. Where are Kapil and his uncle going?

Ans :- _____

3. What does the shop have?

Ans :- _____

4. When can Abu and Kapil go to Sevapur?

Ans :- _____

III. Fill in the blanks by choosing the right options: (5)

1. An hour has _____ minutes. (sixty, seventy)
2. There are _____ days in a week. (seven, eight)
3. There are _____ hands in a clock. (three, four)
4. A scorpion has _____ legs. (five, eight)
5. There are _____ sides in a square. (six, four)

IV. Write down the homes of these animals from the clues given below: (6)

Hole	Kennel	Burrow	Stable	Den	Nest
------	--------	--------	--------	-----	------

1. lion _____
2. Bird _____
3. rabbit _____
4. Horse _____
5. owl _____
6. Dog _____

V. Write where the following monuments are located from the clues given below: (10)

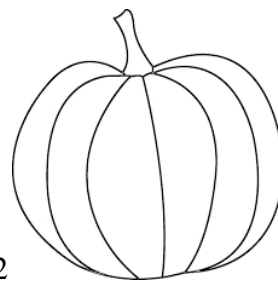
Kolkata	Hyderabad	Agra	Jaipur	Delhi
---------	-----------	------	--------	-------

1. Taj Mahal _____
2. Hawa Mahal _____
3. Charminar _____
4. Jama Masjid _____
5. Victoria Memorial _____

VI. Write (L) for leafy vegetables, (U) for vegetables growing under the ground and (A) for vegetables growing above the ground: (14)



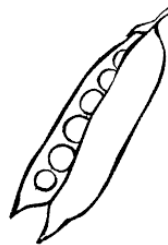
1. _____



2. _____



3. Onion _____



4. _____

5.



6.




7.



VII. Colour the picture of dolphin:

(10)



XAVIER SCHOOL, GAMHARIA

1st Term Exam 2018-19

Class : I.....

Sub :-Hindi Language

F.M. – 60

Name :-

Roll. No. :-

नीचे दिए गए प्रश्नों को ध्यानपूर्वक पढ़े और उत्तर लिखे :

1. दिए गए स्वरों को उनके मात्राओं से मिलान करे:

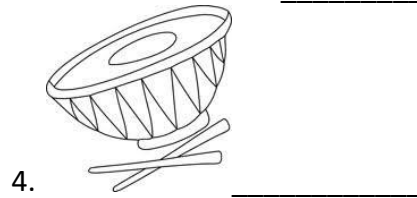

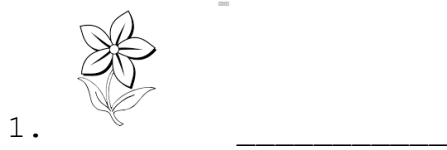
(10)

स्वर	मात्रा
१. आ	ो
२. इ	ौ
३. ई	ि
४. उ	ै
५. ऊ	े
६. ऋ	ॄ
७. ए	ु
८. ऐ	ी
९. ओ	ृ
१०. औ	ा

2. चित्रों के नाम में आए मात्रा के स्वर नीचे से चुनकर लिखे :

(5)

आ	ओ	ई	ए	ऊ
---	---	---	---	---



III. चित्रों को देखकर सही शब्द

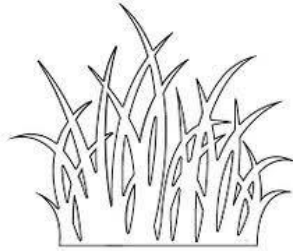
(12)

1. घ-

लिखो :

घर	घड़ा	घीया	घास
----	------	------	-----



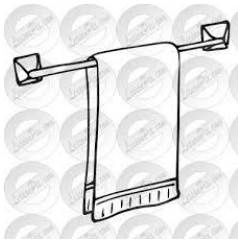






2. त -

ताला	तितली	तौलिया	तकिया
------	-------	--------	-------











3. आ-

माला	तबला	तारा	आम
------	------	------	----









IV. चित्र देखकर सही शब्द चुनकर लिखे :
(5)



1. _____

ताला	छाता	गाता
------	------	------



2. _____

खीर	चीर	तीर
-----	-----	-----



3. _____

गिलास	घिलास	बिलास
-------	-------	-------



4. _____

लडका	लडकी	ककड़ी
------	------	-------



5. _____

चडिया	चिडिया	खटिया
-------	--------	-------

v. सही वाक्य पर (✓) और गलत वाक्य पर (x) का निशान लगाओ :
(4)

1. पढता सूरज हैं I ()
2. पापा बुला रहे है I ()
3. गोल दुनिया है I ()
4. मुझे भी खेलना है I ()

VI. दो - दो नाम लिखे :
(10)

1. सब्जी - _____
2. पक्षी - _____

3. पशु - _____

4. फल - _____

5. वाहन - _____

VII. नाम लिखो :

(4)

1 अपना नाम - _____

2. अपना प्रिय रंग - _____

3. अपना प्रिय फल - _____

4. अपने स्कूल का नाम - _____

VIII. शब्दों को जोड़कर वाक्य को पूरा करे:

(10)

1. नमन + स्कूल + जा + रहा + है I

2. मेरी + माँ + बहुत + सुन्दर + है I

3. तितली + उड़ + रही + है I

4. मुझे + आम + बहुत + पसंद + है I

5. राधा + नाच + रही + है I

XAVIER SCHOOL, GAMHARIA

1st Term Exam 2018-19

Class : I.....

Sub :-Hindi Literature

F.M. – 60

Name :-

Roll. No. :-

1.सही उत्तर चुनकर () लगाइए:- (6)

क) किसकी शादी थी ?

हाथी ()

बकरी ()

गीदड़ ()

ख) चिता क्या लाया ?

खीर ()

मिठाई ()

जलेबी ()

ग) बाघिन किस रंग की साड़ी पहनकर आई ?

नीली ()

पीली ()

हरी ()

घ) चूहे का क्या नाम था ?

कालू ()

पूजा ()

भूखा ()

भीतर क्या रखा था ?

आलू ()

पूड़ी ()

झूला ()

च) चूहा कूदकर किसकी ओर चला गया ?

घर की ()

भीतर की ()

बिल की ()

2.चित्र के सही नाम पर () लगाइए :-


(7)



खरबूजा ()

तरबूज ()

आलू ()



बटुआ ()

कछुआ ()

चुहिया ()



सुराही ()

पुल ()

पुजारी ()



मुरली ()

मुकुट ()

गुलाब ()



बुढिया ()

चुहिया ()

गुडिया ()



भालू ()

फूल ()

झूला ()



चूहा ()

सूरज ()

चूड़ी ()

3. चित्र देखकर वाक्य पूरे कीजिये :-

(9)

क) उधर रख



ख) नीली इधर ला




ग) एक आया



घ) गीता बजा



ङ) इधर रख



च) दाना लाई



छ) सलिल ला



ज) लाल खा



झ) उमड़-उमड़ कर आए



4. निम्नलिखित शब्द में उचित मात्रा लगाकर शब्द पूरे करो :-

(10)

(ा , ि , ी , उ , ू)

बरस त

मकट

भाल

अन ज

सनहरा

बाज

डा कया

गडिया

पर

काज

5. चित्रों के नाम पूरे करो :-

(8)

..... ली



डि या

मु ली



सी

पु



टिया



तब



मछ



6. चित्र देखकर एक नाम और लिखो :-

(4)



हिरन -



किसान -



राजा -

तिनका -

7. एक शब्द में उत्तर दीजिये :-

(8)

क) उमड़ - उमड़ कर कौन गरजा?

उत्तर -

ख) क्या निकल आया ?

उत्तर -

ग) रिमझिम-रिमझिम क्या आ गई ?

उत्तर -

घ) रवि किस पर आया ?

उत्तर -
.....

ड) सबका मन किसके जैसा खिल उठा ?

उत्तर -
.....

च) मधु की बड़ी बहन कौन थी ?

उत्तर -
.....

छ) मुकुट कैसा था ?

उत्तर -
.....

ज) सुमन क्या लाई ?

उत्तर -
.....

.

8. वाक्य बनाओ :-

(4)

क) सितार -

.....
.....
.....

ख) थाली -

.....
.....
.....

ग) सूरज -



.....
.....
.....

घ) धूल -

.....
.....
.....

9. नीचे दिए शब्द पढ़कर चित्र बनाइये :-

(2)



10. रु या रू लिखकर नाम पूरा करो :-

(2)

1. _____ ई



2. _____ माल



3. अम _____ द

4. _____ पया



XAVIER SCHOOL, GAMHARIA

1st Term Exam 2018-19

Class : I.....

Sub :-Moral Science

F.M. – 60

Name :-

Roll. No. :-

A. Fill in the blanks:-

(10)

- 1) The farmer _____ seeds.
- 2) Animals need _____ and _____.
- 3) I like to eat _____.
- 4) The _____ bakes biscuit.
- 5) Mother _____ food.
- 6) The _____ sells vegetables.
- 7) I need _____, _____ and _____.

B. Match the following:-

(10)

- | A | B |
|------------------|-------------|
| a) fruit seller | i. mew |
| b) grocer | ii. Milk |
| c) horse | iii. Flower |
| d) hen | iv. Cluck |
| e) milkman | v. fruits |
| f) cow | vi. Bark |
| g) flower seller | vii. Food |
| h) cats | viii. Neigh |
| i) cook | ix. Grocery |
| j) dog | x. moo |

C. Complete the following sentences:-

(10)

1. Some children live on the streets because _____.
2. Some children pick and eat food out of dustbin because _____.
3. I am lucky because _____.
4. I can read and write because _____.
5. I do not sleep on the street because _____.

D. Complete the following poem:-

(10)

Oh _____ God ,
Thank you for _____ and _____
Who grow green _____ and _____
Thank you , God for _____ who _____
My _____ and _____ it for me .

E. Answer the following:-

(10)

Q1) How do you keep yourself clean?

Ans :-
.....
.....

Q2) If you meet a child who is hungry , what would you do ?

Ans :-
.....
.....

Q3) Who are the other people who help us to get our food?

Ans :-
.....
.....

Q4)How do you keep your room clean?

Ans :-
.....
.....

F. Draw and colour two things which help us to keep our room clean.

(10)

